



くりさがりのある
ひきざん 7

● くりさがりのけいさん
(2 から 9 をひく)

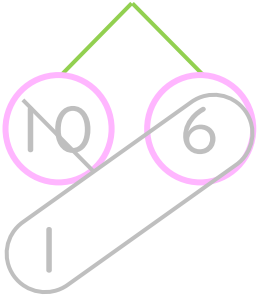


日にち： 月 日

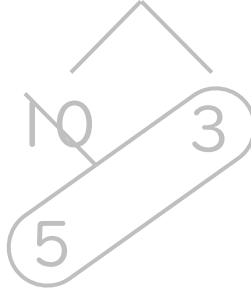
名まえ _____

・ けいさんをしましょう。(うすいじはなぞりましょう。)

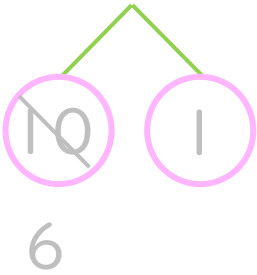
① $16 - 9 = \boxed{7}$



⑤ $13 - 5 = \boxed{}$



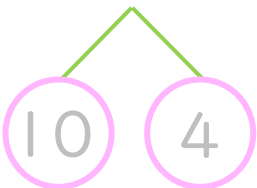
② $11 - 4 = \boxed{}$



⑥ $14 - 8 = \boxed{}$



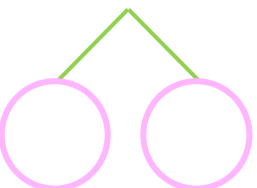
③ $14 - 6 = \boxed{}$



⑦ $12 - 3 = \boxed{}$



④ $11 - 2 = \boxed{}$



⑧ $13 - 7 = \boxed{}$





くりさがりのある
ひきざん 7

● くりさがりのけいさん
(2 から 9 をひく)

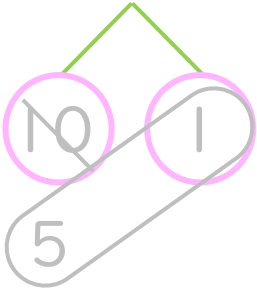


日にち： 月 日

名まえ _____

・ けいさんをしましょう。(うすいじはなぞりましょう。)

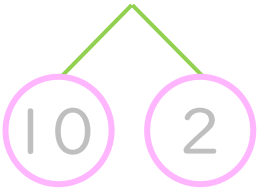
① $11 - 5 = \square$



⑤ $15 - 6 = \square$



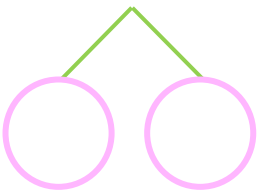
② $12 - 9 = \square$



⑥ $16 - 7 = \square$



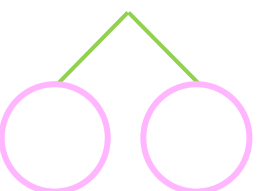
③ $17 - 8 = \square$



⑦ $14 - 9 = \square$



④ $13 - 4 = \square$



⑧ $11 - 8 = \square$



くりさがりのある
ひきざん 7

● くりさがりのけいさん
(2 から 9 をひく)

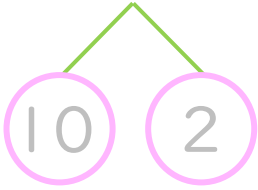


日にち： 月 日

名まえ _____

・ けいさんをしましょう。(うすいじはなぞりましょう。)

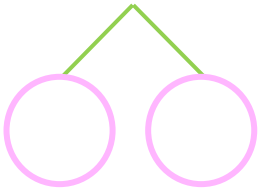
① $12 - 8 = \square$



⑤ $14 - 7 = \square$



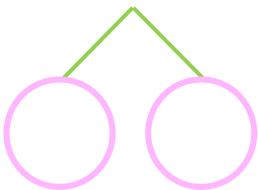
② $11 - 3 = \square$



⑥ $13 - 8 = \square$

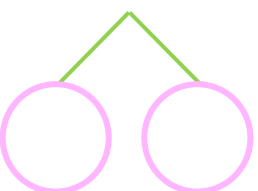


③ $12 - 5 = \square$



⑦ $13 - 4 = \square$

④ $15 - 6 = \square$



⑧ $11 - 9 = \square$





くりさがりのある
ひきざん 7

● くりさがりのけいさん
(2 から 9 をひく)

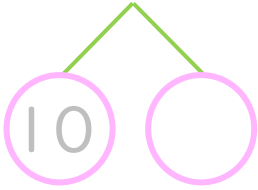


日にち： 月 日

名まえ _____

・ けいさんをしましょう。(うすいじはなぞりましょう。)

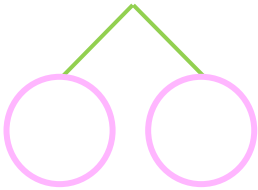
① $15 - 7 = \square$



⑤ $12 - 3 = \square$

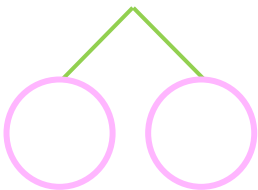


② $17 - 8 = \square$



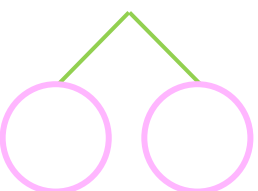
⑥ $12 - 9 = \square$

③ $11 - 5 = \square$



⑦ $13 - 8 = \square$

④ $16 - 9 = \square$



⑧ $14 - 5 = \square$



くりさがりのある
ひきざん 7

● くりさがりのけいさん
(2 から 9 をひく)

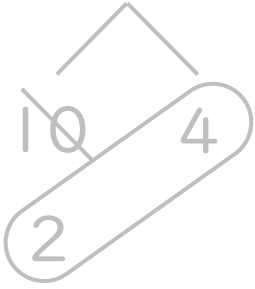


日にち： 月 日

名まえ _____

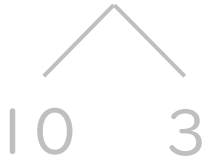
・ けいさんをしましょう。(うすいじはなぞりましょう。)

① $14 - 8 = \square$



⑤ $11 - 6 = \square$

② $13 - 6 = \square$



⑥ $12 - 7 = \square$

③ $12 - 4 = \square$



⑦ $15 - 9 = \square$

④ $17 - 9 = \square$

⑧ $11 - 2 = \square$



くりさがりのある
ひきざん 7

● くりさがりのけいさん
(2 から 9 をひく)

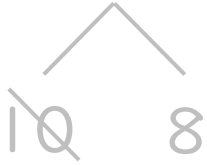


日にち： 月 日

名まえ _____

・ けいさんをしましょう。(うすいじはなぞりましょう。)

① $18 - 9 = \square$



⑤ $11 - 9 = \square$

② $12 - 8 = \square$



⑥ $14 - 7 = \square$

③ $16 - 7 = \square$

⑦ $11 - 7 = \square$

④ $14 - 9 = \square$

⑧ $16 - 8 = \square$



くりさがりのある
ひきざん 7

● くりさがりのけいさん
(2 から 9 をひく)

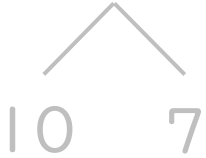


日にち： 月 日

名まえ _____

・ けいさんをしましょう。(うすいじはなぞりましょう。)

① $17 - 9 = \square$



⑤ $11 - 8 = \square$

② $12 - 7 = \square$

⑥ $12 - 3 = \square$

③ $13 - 6 = \square$

⑦ $13 - 9 = \square$

④ $15 - 7 = \square$

⑧ $11 - 6 = \square$



くりさがりのある
ひきざん 7

● くりさがりのけいさん
(2 から 9 をひく)



日にち： 月 日

名まえ _____

・ けいさんをしましょう。

① $11 - 2 = \square$

⑤ $12 - 5 = \square$

② $15 - 9 = \square$

⑥ $13 - 4 = \square$

③ $16 - 7 = \square$

⑦ $11 - 9 = \square$

④ $14 - 6 = \square$

⑧ $12 - 8 = \square$



くりさがりのある
ひきざん 7

● くりさがりのけいさん
(2 から 9 をひく)



日にち： 月 日

名まえ _____

・ けいさんをしましょう。

① $13 - 5 = \square$

⑤ $11 - 3 = \square$

② $12 - 6 = \square$

⑥ $16 - 9 = \square$

③ $11 - 4 = \square$

⑦ $17 - 8 = \square$

④ $15 - 6 = \square$

⑧ $14 - 7 = \square$



くりさがりのある
ひきざん 7

● くりさがりのけいさん
(2 から 9 をひく)

10

日にち： 月 日

名まえ _____

・ けいさんをしましょう。

① $12 - 4 =$

⑥ $12 - 6 =$

② $15 - 8 =$

⑦ $16 - 8 =$

③ $13 - 9 =$

⑧ $13 - 7 =$

④ $12 - 5 =$

⑨ $11 - 4 =$

⑤ $18 - 9 =$

⑩ $11 - 2 =$



くりさがりのある
ひきざん 7

● くりさがりのけいさん
(2 から 9 をひく)



日にち： 月 日

名まえ _____

・ けいさんをしましょう。

① $18 - 9 =$

⑥ $11 - 6 =$

② $12 - 7 =$

⑦ $12 - 9 =$

③ $13 - 6 =$

⑧ $15 - 7 =$

④ $14 - 5 =$

⑨ $11 - 8 =$

⑤ $16 - 8 =$

⑩ $14 - 9 =$



くりさがりのある
ひきざん 7

● くりさがりのけいさん
(2 から 9 をひく)

12

日にち： 月 日

名まえ _____

・ けいさんをしましょう。

① $14 - 8 =$

⑥ $13 - 4 =$

② $15 - 6 =$

⑦ $15 - 8 =$

③ $17 - 9 =$

⑧ $13 - 9 =$

④ $11 - 5 =$

⑨ $11 - 3 =$

⑤ $13 - 8 =$

⑩ $11 - 7 =$



くりさがりのある
ひきざん 7

● くりさがりのけいさん
(2 から 9 をひく)

13

日にち： 月 日

名まえ _____

・ けいさんをしましょう。

① $17 - 8 =$

⑥ $11 - 4 =$

② $14 - 6 =$

⑦ $13 - 5 =$

③ $11 - 9 =$

⑧ $11 - 6 =$

④ $12 - 3 =$

⑨ $16 - 7 =$

⑤ $15 - 9 =$

⑩ $12 - 8 =$



くりさがりのある
ひきざん 7

● くりさがりのけいさん
(2 から 9 をひく)

14

日にち： 月 日

名まえ _____

・ けいさんをしましょう。

① $14 - 9 =$

⑥ $14 - 5 =$

② $11 - 5 =$

⑦ $11 - 8 =$

③ $16 - 8 =$

⑧ $14 - 7 =$

④ $18 - 9 =$

⑨ $12 - 9 =$

⑤ $12 - 4 =$

⑩ $13 - 6 =$




くりさがりのある
ひきざん 7

● くりさがりのけいさん
(2 から 9 をひく)

15

めざせ90点!



名まえ _____

・ けいさんをしましょう。(各10点)

① $14 - 5 =$

⑥ $13 - 7 =$

② $15 - 9 =$

⑦ $14 - 6 =$

③ $11 - 7 =$

⑧ $15 - 8 =$

④ $12 - 6 =$

⑨ $13 - 5 =$

⑤ $12 - 4 =$

⑩ $11 - 3 =$




くりさがりのある
ひきざん 7

● くりさがりのけいさん
(2 から 9 をひく)

16

めざせ90点!



名まえ _____

・ けいさんをしましょう。(各10点)

① $12 - 5 = \square$

⑥ $13 - 9 = \square$

② $13 - 8 = \square$

⑦ $15 - 7 = \square$

③ $11 - 7 = \square$

⑧ $12 - 7 = \square$

④ $12 - 6 = \square$

⑨ $14 - 8 = \square$

⑤ $13 - 4 = \square$

⑩ $17 - 9 = \square$



くりさがりのある
ひきざん 7

● くりさがりのけいさん
(2 から 9 をひく)

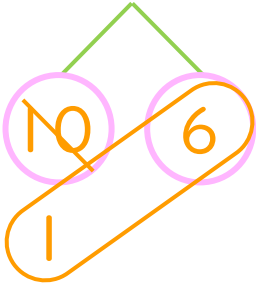


日にち： 月 日

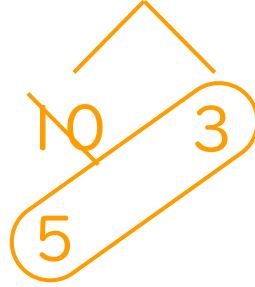
名まえ _____

・ けいさんをしましょう。(うすいじはなぞりましょう。)

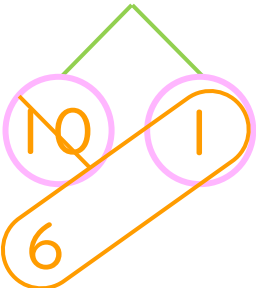
① $16 - 9 = 7$



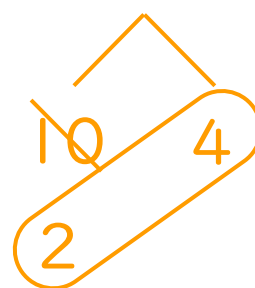
⑤ $13 - 5 = 8$



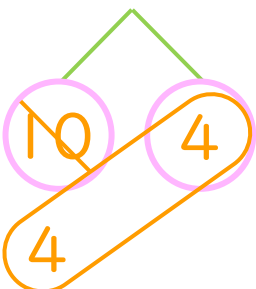
② $11 - 4 = 7$



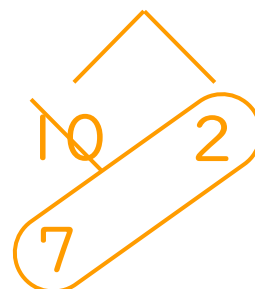
⑥ $14 - 8 = 6$



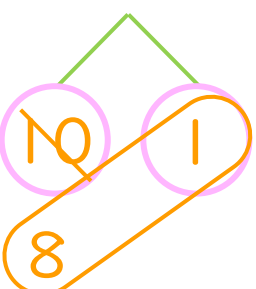
③ $14 - 6 = 8$



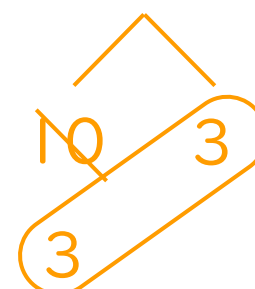
⑦ $12 - 3 = 9$



④ $11 - 2 = 9$



⑧ $13 - 7 = 6$





くりさがりのある
ひきざん 7

● くりさがりのけいさん
(2 から 9 をひく)

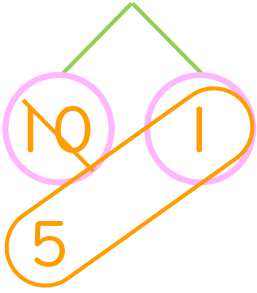


日にち： 月 日

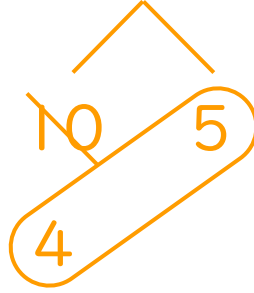
名まえ _____

・ けいさんをしましょう。(うすいじはなぞりましょう。)

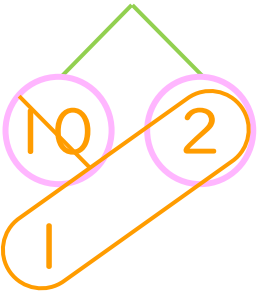
① $11 - 5 = 6$



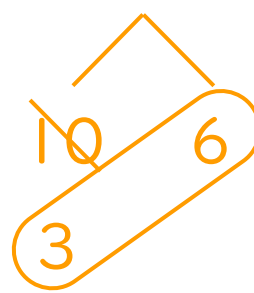
⑤ $15 - 6 = 9$



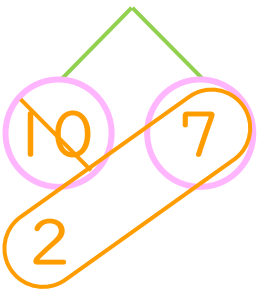
② $12 - 9 = 3$



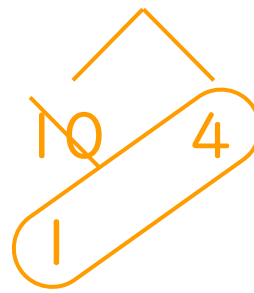
⑥ $16 - 7 = 9$



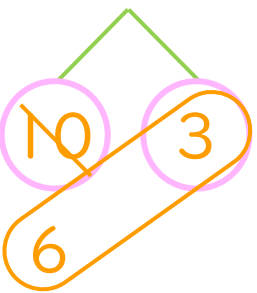
③ $17 - 8 = 9$



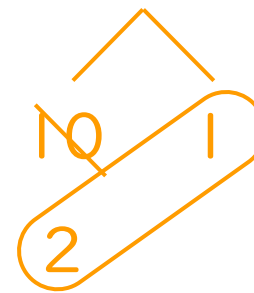
⑦ $14 - 9 = 5$



④ $13 - 4 = 9$



⑧ $11 - 8 = 3$





くりさがりのある
ひきざん 7

● くりさがりのけいさん
(2 から 9 をひく)

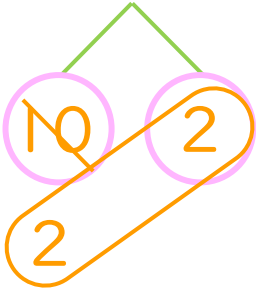


日にち： 月 日

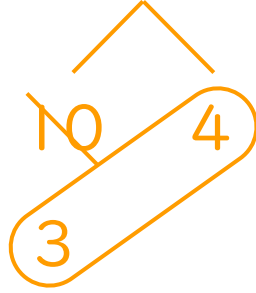
名まえ _____

・ けいさんをしましょう。(うすいじはなぞりましょう。)

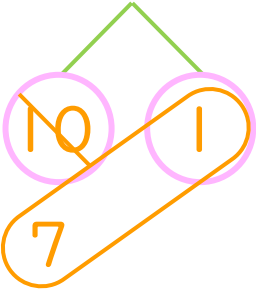
① $12 - 8 = 4$



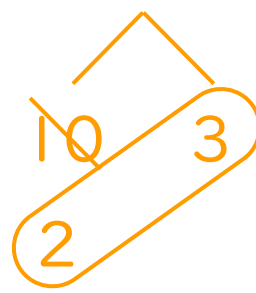
⑤ $14 - 7 = 7$



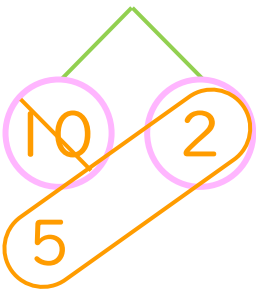
② $11 - 3 = 8$



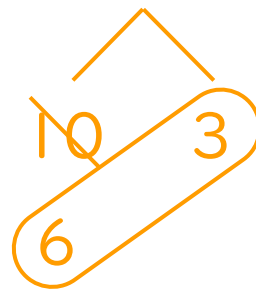
⑥ $13 - 8 = 5$



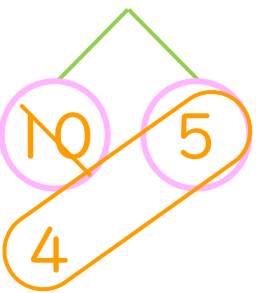
③ $12 - 5 = 7$



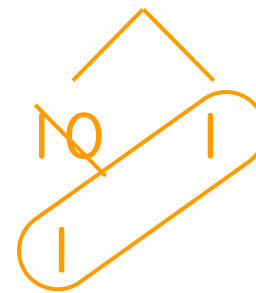
⑦ $13 - 4 = 9$



④ $15 - 6 = 9$



⑧ $11 - 9 = 2$





くりさがりのある
ひきざん 7

● くりさがりのけいさん
(2 から 9 をひく)

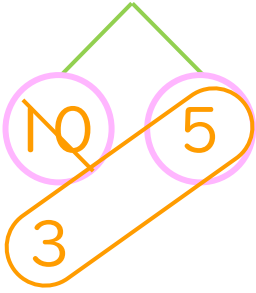
4

日にち： 月 日

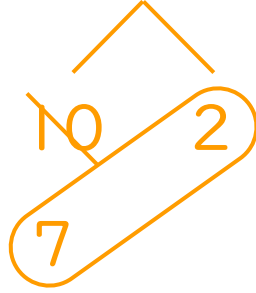
名まえ _____

・ けいさんをしましょう。(うすいじはなぞりましょう。)

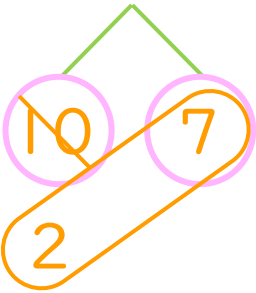
① $15 - 7 = 8$



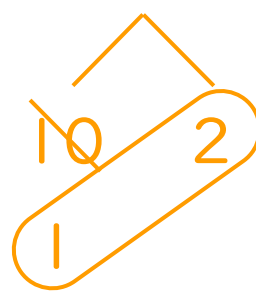
⑤ $12 - 3 = 9$



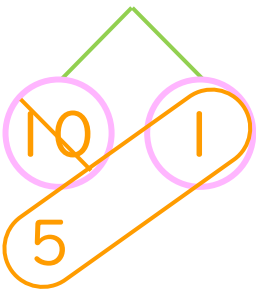
② $17 - 8 = 9$



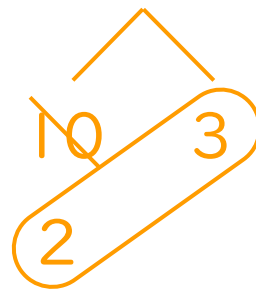
⑥ $12 - 9 = 3$



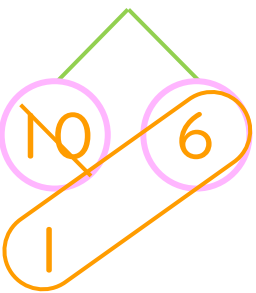
③ $11 - 5 = 6$



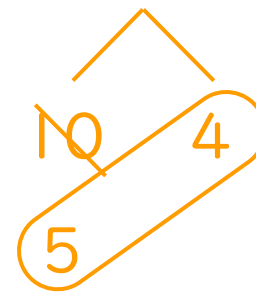
⑦ $13 - 8 = 5$



④ $16 - 9 = 7$



⑧ $14 - 5 = 9$





くりさがりのある
ひきざん 7

● くりさがりのけいさん
(2 から 9 をひく)

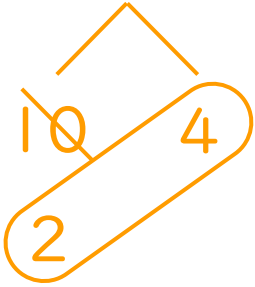


日にち： 月 日

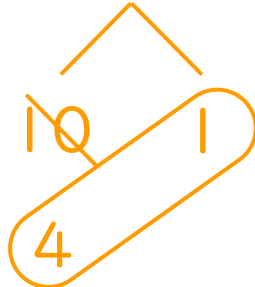
名まえ _____

・ けいさんをしましょう。(うすいじはなぞりましょう。)

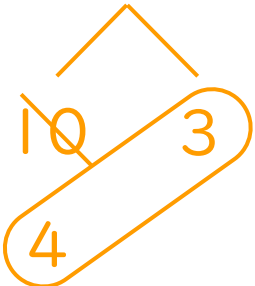
① $14 - 8 = 6$



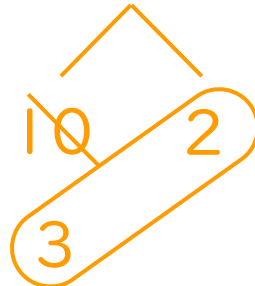
⑤ $11 - 6 = 5$



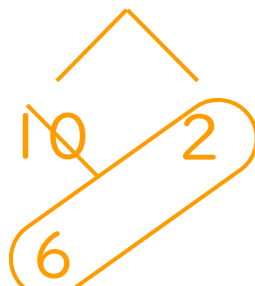
② $13 - 6 = 7$




⑥ $12 - 7 = 5$




③ $12 - 4 = 8$



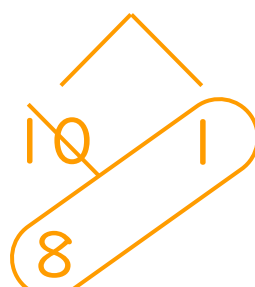
⑦ $15 - 9 = 6$



④ $17 - 9 = 8$



⑧ $11 - 2 = 9$





くりさがりのある
ひきざん 7

● くりさがりのけいさん
(2 から 9 をひく)

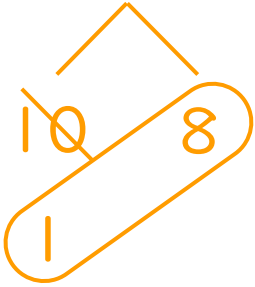


日にち： 月 日

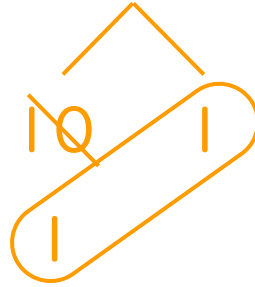
名まえ _____

・ けいさんをしましょう。(うすいじはなぞりましょう。)

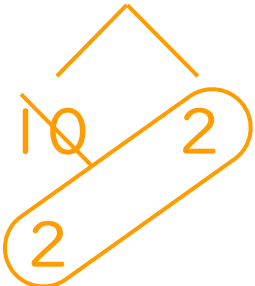
① $18 - 9 = 9$



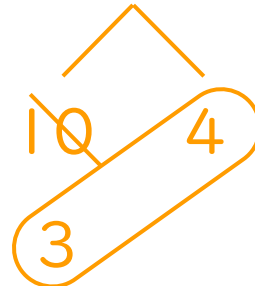
⑤ $11 - 9 = 2$



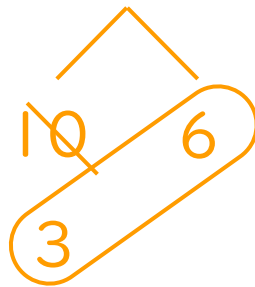
② $12 - 8 = 4$



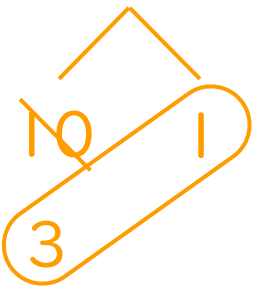
⑥ $14 - 7 = 7$




③ $16 - 7 = 9$



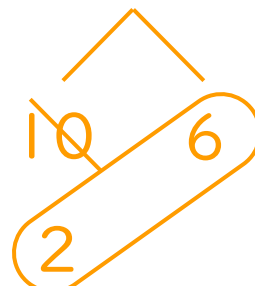
⑦ $11 - 7 = 4$



④ $14 - 9 = 5$



⑧ $16 - 8 = 8$





くりさがりのある
ひきざん 7

くりさがりのけいさん
(2 から 9 をひく)

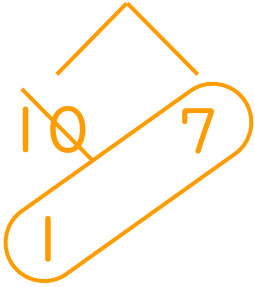


日にち： 月 日

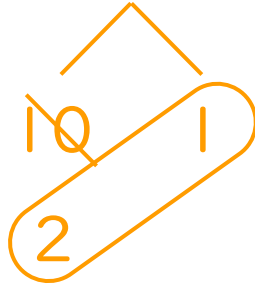
名まえ _____

・ けいさんをしましょう。(うすいじはなぞりましょう。)

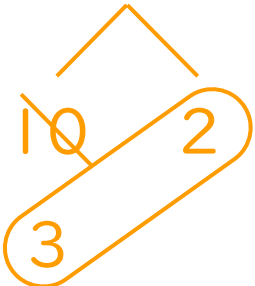
① $17 - 9 = 8$



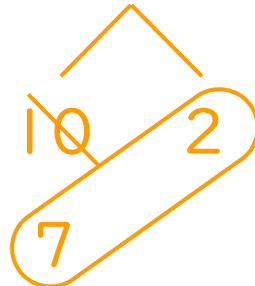
⑤ $11 - 8 = 3$



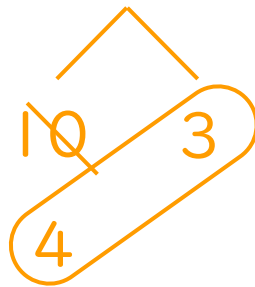
② $12 - 7 = 5$



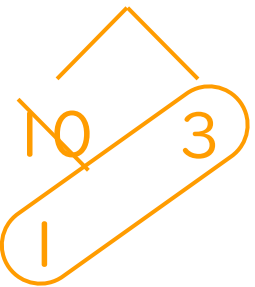
⑥ $12 - 3 = 9$



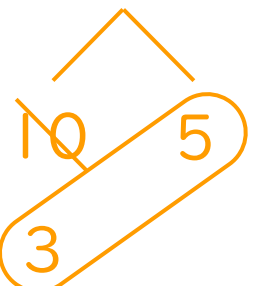
③ $13 - 6 = 7$



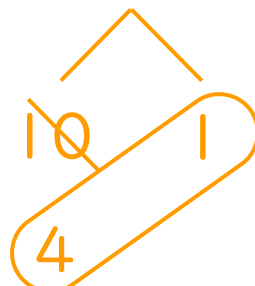
⑦ $13 - 9 = 4$



④ $15 - 7 = 8$



⑧ $11 - 6 = 5$





くりさがりのある
ひきざん 7

● くりさがりのけいさん
(2 から 9 をひく)

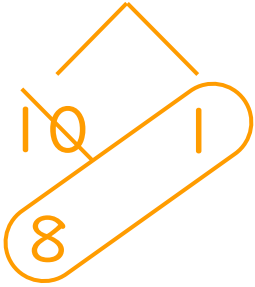


日にち： 月 日

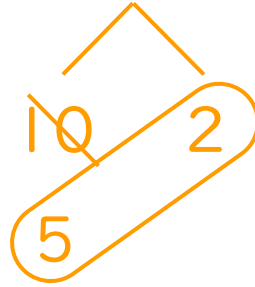
名まえ _____

・ けいさんをしましょう。

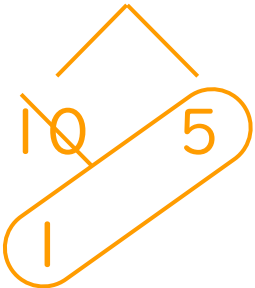
① $11 - 2 = 9$



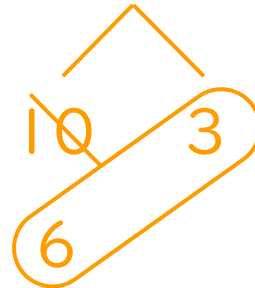
⑤ $12 - 5 = 7$



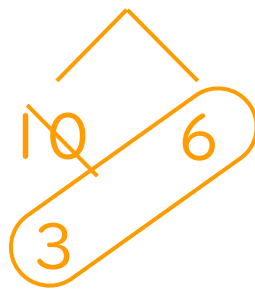
② $15 - 9 = 6$



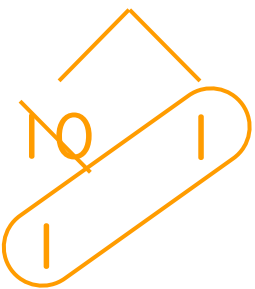
⑥ $13 - 4 = 9$



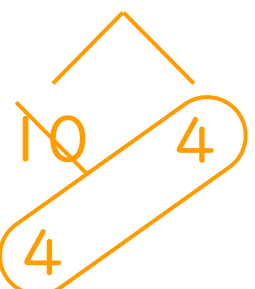
③ $16 - 7 = 9$



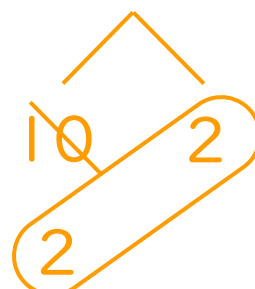
⑦ $11 - 9 = 2$



④ $14 - 6 = 8$



⑧ $12 - 8 = 4$





くりさがりのある
ひきざん 7

● くりさがりのけいさん
(2 から 9 をひく)

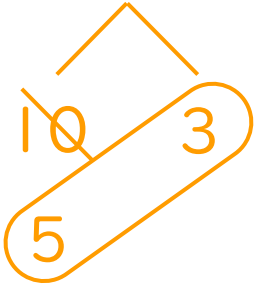


日にち： 月 日

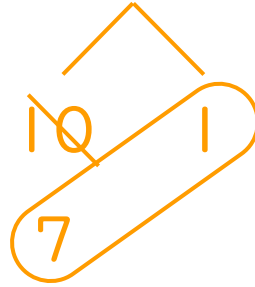
名まえ _____

・ けいさんをしましょう。

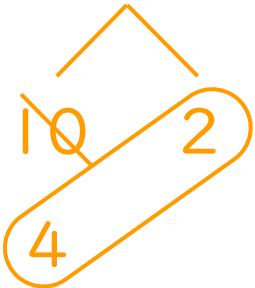
① $13 - 5 = 8$



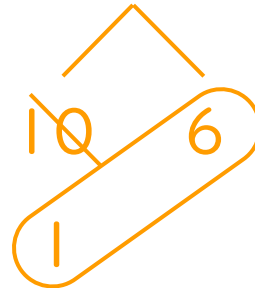
⑤ $11 - 3 = 8$



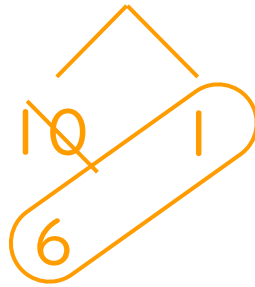
② $12 - 6 = 6$



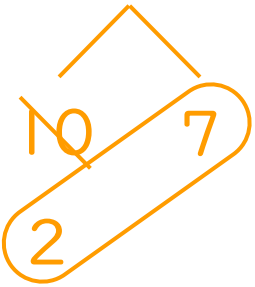
⑥ $16 - 9 = 7$



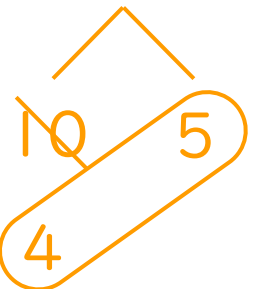
③ $11 - 4 = 7$



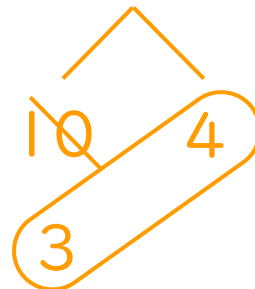
⑦ $17 - 8 = 9$



④ $15 - 6 = 9$



⑧ $14 - 7 = 7$





くりさがりのある
ひきざん 7

● くりさがりのけいさん
(2 から 9 をひく)

10

日にち： 月 日

名まえ _____

・ けいさんをしましょう。

$$\begin{array}{r} \textcircled{1} \quad 12 - 4 = \boxed{8} \\ \quad \swarrow \quad \searrow \\ \quad 10 \quad 2 \end{array}$$

$$\begin{array}{r} \textcircled{6} \quad 12 - 6 = \boxed{6} \\ \quad \swarrow \quad \searrow \\ \quad 10 \quad 2 \end{array}$$

$$\begin{array}{r} \textcircled{2} \quad 15 - 8 = \boxed{7} \\ \quad \swarrow \quad \searrow \\ \quad 10 \quad 5 \end{array}$$

$$\begin{array}{r} \textcircled{7} \quad 16 - 8 = \boxed{8} \\ \quad \swarrow \quad \searrow \\ \quad 10 \quad 6 \end{array}$$

$$\begin{array}{r} \textcircled{3} \quad 13 - 9 = \boxed{4} \\ \quad \swarrow \quad \searrow \\ \quad 10 \quad 3 \end{array}$$

$$\begin{array}{r} \textcircled{8} \quad 13 - 7 = \boxed{6} \\ \quad \swarrow \quad \searrow \\ \quad 10 \quad 3 \end{array}$$

$$\begin{array}{r} \textcircled{4} \quad 12 - 5 = \boxed{7} \\ \quad \swarrow \quad \searrow \\ \quad 10 \quad 2 \end{array}$$

$$\begin{array}{r} \textcircled{9} \quad 11 - 4 = \boxed{7} \\ \quad \swarrow \quad \searrow \\ \quad 10 \quad 1 \end{array}$$

$$\begin{array}{r} \textcircled{5} \quad 18 - 9 = \boxed{9} \\ \quad \swarrow \quad \searrow \\ \quad 10 \quad 8 \end{array}$$

$$\begin{array}{r} \textcircled{10} \quad 11 - 2 = \boxed{9} \\ \quad \swarrow \quad \searrow \\ \quad 10 \quad 1 \end{array}$$





くりさがりのある
ひきざん 7

● くりさがりのけいさん
(2 から 9 をひく)



日にち： 月 日

名まえ _____

・ けいさんをしましょう。

$$\begin{array}{r} \textcircled{1} \quad 18 - 9 = \boxed{9} \\ \swarrow \quad \searrow \\ 10 \quad 8 \end{array}$$

$$\begin{array}{r} \textcircled{6} \quad 11 - 6 = \boxed{5} \\ \swarrow \quad \searrow \\ 10 \quad 1 \end{array}$$

$$\begin{array}{r} \textcircled{2} \quad 12 - 7 = \boxed{5} \\ \swarrow \quad \searrow \\ 10 \quad 2 \end{array}$$

$$\begin{array}{r} \textcircled{7} \quad 12 - 9 = \boxed{3} \\ \swarrow \quad \searrow \\ 10 \quad 2 \end{array}$$

$$\begin{array}{r} \textcircled{3} \quad 13 - 6 = \boxed{7} \\ \swarrow \quad \searrow \\ 10 \quad 3 \end{array}$$

$$\begin{array}{r} \textcircled{8} \quad 15 - 7 = \boxed{8} \\ \swarrow \quad \searrow \\ 10 \quad 5 \end{array}$$

$$\begin{array}{r} \textcircled{4} \quad 14 - 5 = \boxed{9} \\ \swarrow \quad \searrow \\ 10 \quad 4 \end{array}$$

$$\begin{array}{r} \textcircled{9} \quad 11 - 8 = \boxed{3} \\ \swarrow \quad \searrow \\ 10 \quad 1 \end{array}$$

$$\begin{array}{r} \textcircled{5} \quad 16 - 8 = \boxed{8} \\ \swarrow \quad \searrow \\ 10 \quad 6 \end{array}$$

$$\begin{array}{r} \textcircled{10} \quad 14 - 9 = \boxed{5} \\ \swarrow \quad \searrow \\ 10 \quad 4 \end{array}$$





くりさがりのある
ひきざん 7

くりさがりのけいさん
(2 から 9 をひく)

12

日にち： 月 日

名まえ _____

・ けいさんをしましょう。

$$\begin{array}{r} \textcircled{1} \quad 14 - 8 = \boxed{6} \\ \swarrow \quad \searrow \\ 10 \quad 4 \end{array}$$

$$\begin{array}{r} \textcircled{6} \quad 13 - 4 = \boxed{9} \\ \swarrow \quad \searrow \\ 10 \quad 3 \end{array}$$

$$\begin{array}{r} \textcircled{2} \quad 15 - 6 = \boxed{9} \\ \swarrow \quad \searrow \\ 10 \quad 5 \end{array}$$

$$\begin{array}{r} \textcircled{7} \quad 15 - 8 = \boxed{7} \\ \swarrow \quad \searrow \\ 10 \quad 5 \end{array}$$

$$\begin{array}{r} \textcircled{3} \quad 17 - 9 = \boxed{8} \\ \swarrow \quad \searrow \\ 10 \quad 7 \end{array}$$

$$\begin{array}{r} \textcircled{8} \quad 13 - 9 = \boxed{4} \\ \swarrow \quad \searrow \\ 10 \quad 3 \end{array}$$

$$\begin{array}{r} \textcircled{4} \quad 11 - 5 = \boxed{6} \\ \swarrow \quad \searrow \\ 10 \quad 1 \end{array}$$

$$\begin{array}{r} \textcircled{9} \quad 11 - 3 = \boxed{8} \\ \swarrow \quad \searrow \\ 10 \quad 1 \end{array}$$

$$\begin{array}{r} \textcircled{5} \quad 13 - 8 = \boxed{5} \\ \swarrow \quad \searrow \\ 10 \quad 3 \end{array}$$

$$\begin{array}{r} \textcircled{10} \quad 11 - 7 = \boxed{4} \\ \swarrow \quad \searrow \\ 10 \quad 1 \end{array}$$





くりさがりのある
ひきざん 7

● くりさがりのけいさん
(2 から 9 をひく)

13

日にち： 月 日

名まえ _____

・ けいさんをしましょう。

$$\textcircled{1} \begin{array}{r} 17 \\ \swarrow \searrow \\ 10 \quad 7 \end{array} - 8 = \boxed{9}$$

$$\textcircled{6} \begin{array}{r} 11 \\ \swarrow \searrow \\ 10 \quad 1 \end{array} - 4 = \boxed{7}$$

$$\textcircled{2} \begin{array}{r} 14 \\ \swarrow \searrow \\ 10 \quad 4 \end{array} - 6 = \boxed{8}$$

$$\textcircled{7} \begin{array}{r} 13 \\ \swarrow \searrow \\ 10 \quad 3 \end{array} - 5 = \boxed{8}$$

$$\textcircled{3} \begin{array}{r} 11 \\ \swarrow \searrow \\ 10 \quad 1 \end{array} - 9 = \boxed{2}$$

$$\textcircled{8} \begin{array}{r} 11 \\ \swarrow \searrow \\ 10 \quad 1 \end{array} - 6 = \boxed{5}$$

$$\textcircled{4} \begin{array}{r} 12 \\ \swarrow \searrow \\ 10 \quad 2 \end{array} - 3 = \boxed{9}$$

$$\textcircled{9} \begin{array}{r} 16 \\ \swarrow \searrow \\ 10 \quad 6 \end{array} - 7 = \boxed{9}$$

$$\textcircled{5} \begin{array}{r} 15 \\ \swarrow \searrow \\ 10 \quad 5 \end{array} - 9 = \boxed{6}$$

$$\textcircled{10} \begin{array}{r} 12 \\ \swarrow \searrow \\ 10 \quad 2 \end{array} - 8 = \boxed{4}$$





くりさがりのある
ひきざん 7

● くりさがりのけいさん
(2 から 9 をひく)

14

日にち： 月 日

名まえ _____

・ けいさんをしましょう。

$$\begin{array}{r} \textcircled{1} \quad 14 - 9 = \boxed{5} \\ \swarrow \quad \searrow \\ 10 \quad 4 \end{array}$$

$$\begin{array}{r} \textcircled{6} \quad 14 - 5 = \boxed{9} \\ \swarrow \quad \searrow \\ 10 \quad 4 \end{array}$$

$$\begin{array}{r} \textcircled{2} \quad 11 - 5 = \boxed{6} \\ \swarrow \quad \searrow \\ 10 \quad 1 \end{array}$$

$$\begin{array}{r} \textcircled{7} \quad 11 - 8 = \boxed{3} \\ \swarrow \quad \searrow \\ 10 \quad 1 \end{array}$$

$$\begin{array}{r} \textcircled{3} \quad 16 - 8 = \boxed{8} \\ \swarrow \quad \searrow \\ 10 \quad 6 \end{array}$$

$$\begin{array}{r} \textcircled{8} \quad 14 - 7 = \boxed{7} \\ \swarrow \quad \searrow \\ 10 \quad 4 \end{array}$$

$$\begin{array}{r} \textcircled{4} \quad 18 - 9 = \boxed{9} \\ \swarrow \quad \searrow \\ 10 \quad 8 \end{array}$$

$$\begin{array}{r} \textcircled{9} \quad 12 - 9 = \boxed{3} \\ \swarrow \quad \searrow \\ 10 \quad 2 \end{array}$$

$$\begin{array}{r} \textcircled{5} \quad 12 - 4 = \boxed{8} \\ \swarrow \quad \searrow \\ 10 \quad 2 \end{array}$$

$$\begin{array}{r} \textcircled{10} \quad 13 - 6 = \boxed{7} \\ \swarrow \quad \searrow \\ 10 \quad 3 \end{array}$$




くりさがりのある
ひきざん 7

● くりさがりのけいさん
(2 から 9 をひく)

15

めざせ90点!



名まえ _____

・ けいさんをしましょう。(各10点)

$$\textcircled{1} \begin{array}{r} 14 \\ \swarrow \quad \searrow \\ 10 \quad 4 \end{array} - 5 = \boxed{9}$$

$$\textcircled{6} \begin{array}{r} 13 \\ \swarrow \quad \searrow \\ 10 \quad 3 \end{array} - 7 = \boxed{6}$$

$$\textcircled{2} \begin{array}{r} 15 \\ \swarrow \quad \searrow \\ 10 \quad 5 \end{array} - 9 = \boxed{6}$$

$$\textcircled{7} \begin{array}{r} 14 \\ \swarrow \quad \searrow \\ 10 \quad 4 \end{array} - 6 = \boxed{8}$$

$$\textcircled{3} \begin{array}{r} 11 \\ \swarrow \quad \searrow \\ 10 \quad 1 \end{array} - 7 = \boxed{4}$$

$$\textcircled{8} \begin{array}{r} 15 \\ \swarrow \quad \searrow \\ 10 \quad 5 \end{array} - 8 = \boxed{7}$$

$$\textcircled{4} \begin{array}{r} 12 \\ \swarrow \quad \searrow \\ 10 \quad 2 \end{array} - 6 = \boxed{6}$$

$$\textcircled{9} \begin{array}{r} 13 \\ \swarrow \quad \searrow \\ 10 \quad 3 \end{array} - 5 = \boxed{8}$$

$$\textcircled{5} \begin{array}{r} 12 \\ \swarrow \quad \searrow \\ 10 \quad 2 \end{array} - 4 = \boxed{8}$$

$$\textcircled{10} \begin{array}{r} 11 \\ \swarrow \quad \searrow \\ 10 \quad 1 \end{array} - 3 = \boxed{8}$$






くりさがりのある
ひきざん 7

● くりさがりのけいさん
(2 から 9 をひく)

16

めざせ90点!



名まえ _____

・ けいさんをしましょう。(各10点)

$$\textcircled{1} \begin{array}{r} 12 \\ \swarrow \quad \searrow \\ 10 \quad 2 \end{array} - 5 = \boxed{7}$$

$$\textcircled{6} \begin{array}{r} 13 \\ \swarrow \quad \searrow \\ 10 \quad 3 \end{array} - 9 = \boxed{4}$$

$$\textcircled{2} \begin{array}{r} 13 \\ \swarrow \quad \searrow \\ 10 \quad 3 \end{array} - 8 = \boxed{5}$$

$$\textcircled{7} \begin{array}{r} 15 \\ \swarrow \quad \searrow \\ 10 \quad 5 \end{array} - 7 = \boxed{8}$$

$$\textcircled{3} \begin{array}{r} 11 \\ \swarrow \quad \searrow \\ 10 \quad 1 \end{array} - 7 = \boxed{4}$$

$$\textcircled{8} \begin{array}{r} 12 \\ \swarrow \quad \searrow \\ 10 \quad 2 \end{array} - 7 = \boxed{5}$$

$$\textcircled{4} \begin{array}{r} 12 \\ \swarrow \quad \searrow \\ 10 \quad 2 \end{array} - 6 = \boxed{6}$$

$$\textcircled{9} \begin{array}{r} 14 \\ \swarrow \quad \searrow \\ 10 \quad 4 \end{array} - 8 = \boxed{6}$$

$$\textcircled{5} \begin{array}{r} 13 \\ \swarrow \quad \searrow \\ 10 \quad 3 \end{array} - 4 = \boxed{9}$$

$$\textcircled{10} \begin{array}{r} 17 \\ \swarrow \quad \searrow \\ 10 \quad 7 \end{array} - 9 = \boxed{8}$$

