



# のこりはいくつ？

◎ 10からひくひきざん


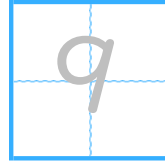


日にち：            月            日


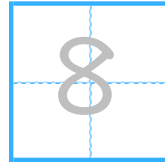
名まえ \_\_\_\_\_

・ ひきざんをしましょう。(うすいじはなぞりましょう。)

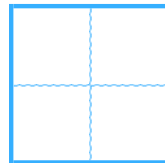
①  $10 - 1 =$



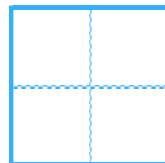
②  $10 - 2 =$



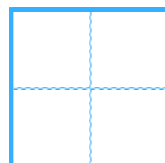
③  $10 - 3 =$



④  $10 - 4 =$



⑤  $10 - 5 =$





のこりはいくつ？

◎ 10 から ひく ひきざん

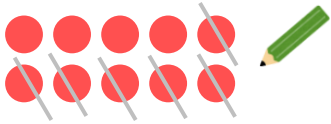
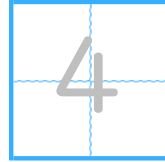


日にち：            月            日

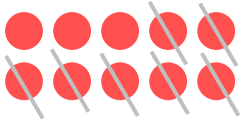
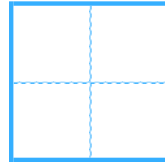
名まえ \_\_\_\_\_

・ ひきざんを しまししょう。(うすいじはなぞりまししょう。)

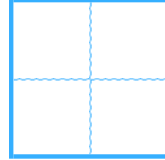
①  $10 - 6 =$



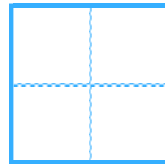
②  $10 - 7 =$



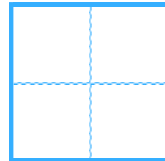
③  $10 - 8 =$



④  $10 - 9 =$



⑤  $10 - 1 =$





のこりはいくつ？

◎ 10 から ひく ひきざん

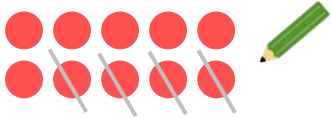
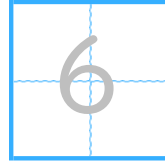


日にち：            月            日

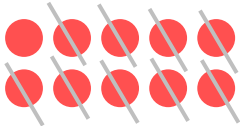
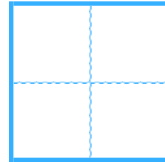
名まえ \_\_\_\_\_

- ひきざんをしましょう。(うすいじはなぞりましょう。)

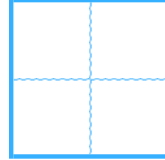
①  $10 - 4 =$



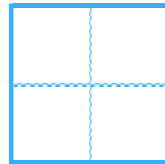
②  $10 - 9 =$



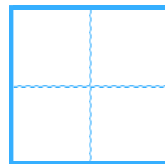
③  $10 - 3 =$



④  $10 - 6 =$



⑤  $10 - 5 =$





のこりはいくつ？

◎ 10 から ひく ひきざん



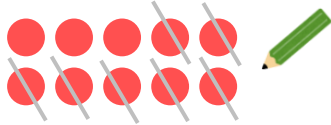
日にち：            月            日

名まえ \_\_\_\_\_

・ ひきざんを しまししょう。(うすいじはなぞりまししょう。)


①  $10 - 7 =$

3
---




②  $10 - 1 =$

--



③  $10 - 8 =$

--



④  $10 - 2 =$

--



⑤  $10 - 4 =$

--





のこりはいくつ？

◎ 10からひくひきざん



日にち：            月            日

名まえ \_\_\_\_\_

・ ひきざんをしましょう。(うすいじはなぞりましょう。)

①  $10 - 3 =$ 

7
---

②  $10 - 1 =$ 


③  $10 - 5 =$ 


④  $10 - 6 =$ 


⑤  $10 - 8 =$ 




のこりはいくつ？

◎ 10からひくひきざん

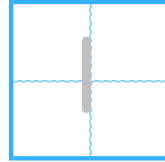


日にち：            月            日

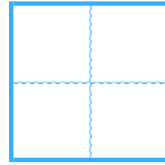
名まえ \_\_\_\_\_

- ひきざんをしましょう。(うすいじはなぞりましょう。)

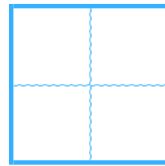
①  $10 - 9 =$



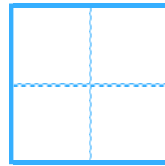
②  $10 - 4 =$



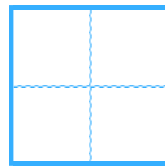
③  $10 - 2 =$



④  $10 - 7 =$



⑤  $10 - 5 =$





のこりはいくつ？

◎ 10 から ひく ひきざん

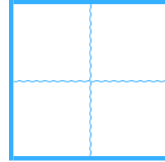


日にち：            月            日

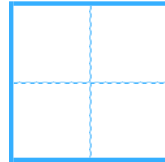
名まえ \_\_\_\_\_

・ ひきざんを しましょう。

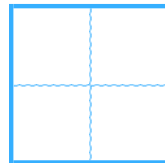
①  $10 - 3 =$



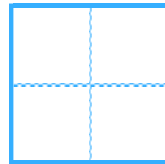
②  $10 - 8 =$



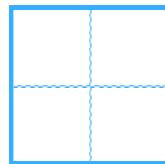
③  $10 - 5 =$



④  $10 - 1 =$



⑤  $10 - 7 =$





のこりはいくつ？

◎ 10 から ひく ひきざん

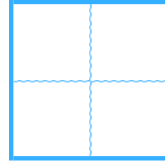


日にち：            月            日

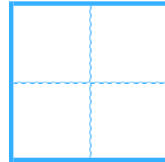
名まえ \_\_\_\_\_

・ ひきざんを しましょう。

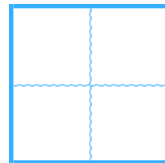
①  $10 - 9 =$



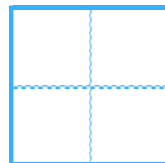
②  $10 - 4 =$



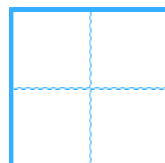
③  $10 - 2 =$



④  $10 - 6 =$



⑤  $10 - 3 =$







のこりはいくつ 9

◎ 10 から ひく ひきざん

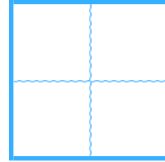


日にち：            月            日

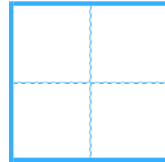
名まえ \_\_\_\_\_

・ ひきざんを しましょう。

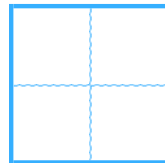
①  $10 - 4 =$



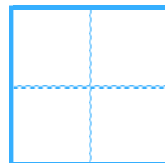
②  $10 - 7 =$



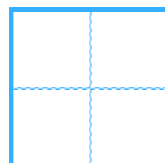
③  $10 - 9 =$



④  $10 - 2 =$



⑤  $10 - 6 =$





のこりはいくつ？

● 10からひくひきざん

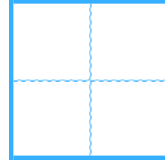


日にち：            月            日

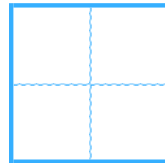
名まえ \_\_\_\_\_

・ ひきざんをしましょう。

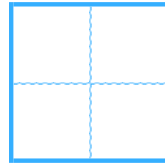
①  $10 - 6 =$



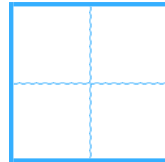
②  $8 - 7 =$



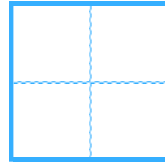
③  $6 - 3 =$



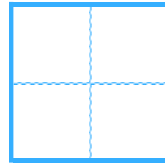
④  $4 - 2 =$



⑤  $5 - 1 =$



⑥  $10 - 4 =$





のこりはいくつ？

◎ 10からひくひきざん

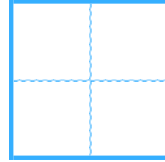


日にち：            月            日

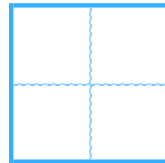
名まえ \_\_\_\_\_

・ ひきざんをしましょう。

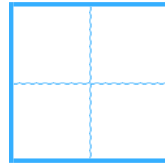
①  $9 - 6 =$



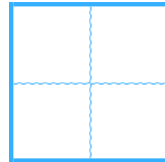
②  $7 - 3 =$



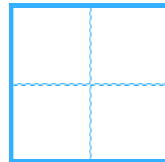
③  $2 - 1 =$



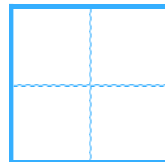
④  $5 - 3 =$



⑤  $10 - 2 =$



⑥  $6 - 5 =$





のこりはいくつ？

◎ 10 から ひく ひきざん

12

日にち：            月            日

名まえ \_\_\_\_\_

・ ひきざんを しましょう。

①  $8 - 3 =$


②  $9 - 4 =$


③  $5 - 2 =$


④  $10 - 3 =$


⑤  $6 - 2 =$


⑥  $7 - 1 =$




のこりはいくつ？

◎ 10からひくひきざん

13

日にち：            月            日

名まえ \_\_\_\_\_

・ ひきざんをしましょう。

①  $6 - 4 =$


②  $10 - 1 =$


③  $4 - 3 =$


④  $7 - 5 =$


⑤  $10 - 9 =$


⑥  $8 - 5 =$




のこりはいくつ？

◎ 10からひくひきざん

14

日にち：            月            日

名まえ \_\_\_\_\_

・ ひきざんをしましょう。

①  $8 - 1 =$


②  $5 - 4 =$


③  $7 - 6 =$


④  $10 - 8 =$


⑤  $9 - 2 =$


⑥  $10 - 5 =$







のこりはいくつ？

◎ 10 から ひく ひきざん

15

めざせ80てん!



名まえ \_\_\_\_\_

・ ひきざんを しましょう。(各20点)

①  $10 - 7 =$


②  $7 - 2 =$


③  $3 - 1 =$


④  $9 - 3 =$


⑤  $8 - 4 =$





のこりはいくつ？

◎ 10 から ひく ひきざん

16

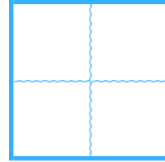
めざせ80てん!



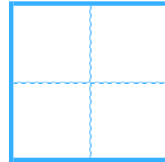
名まえ \_\_\_\_\_

・ ひきざんを しましょう。(各20点)

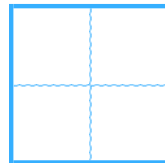
①  $10 - 4 =$



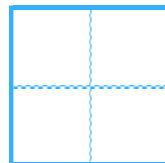
②  $6 - 1 =$



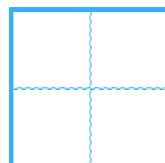
③  $8 - 5 =$



④  $9 - 7 =$



⑤  $3 - 2 =$







のこりはいくつ？

◎ 10 から ひく ひきざん


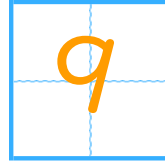


日にち：            月            日


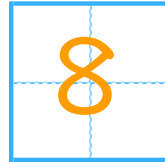
名まえ \_\_\_\_\_

・ ひきざんを しましょう。(うすいじはなぞりましょう。)

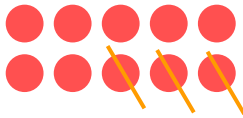
$$\textcircled{1} \quad 10 - 1 =$$




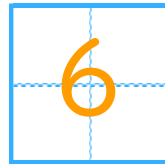
$$\textcircled{2} \quad 10 - 2 =$$




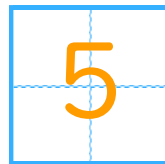
$$\textcircled{3} \quad 10 - 3 =$$



$$\textcircled{4} \quad 10 - 4 =$$



$$\textcircled{5} \quad 10 - 5 =$$





のこりはいくつ？

◎ 10からひくひきざん

2


日にち：            月            日

名まえ \_\_\_\_\_

・ ひきざんをしましょう。(うすいじはなぞりましょう。)


$$\textcircled{1} \quad 10 - 6 =$$

4




$$\textcircled{2} \quad 10 - 7 =$$

3




$$\textcircled{3} \quad 10 - 8 =$$

2




$$\textcircled{4} \quad 10 - 9 =$$

1



$$\textcircled{5} \quad 10 - 1 =$$

9





のこりはいくつ？

◎ 10 から ひく ひきざん


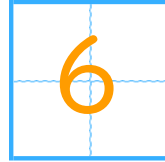


日にち：            月            日


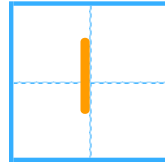
名まえ \_\_\_\_\_

・ ひきざんを しまししょう。(うすいじはなぞりましよう。)

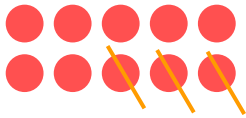
①  $10 - 4 =$




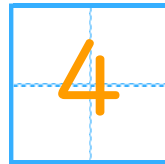
②  $10 - 9 =$




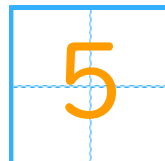
③  $10 - 3 =$



④  $10 - 6 =$



⑤  $10 - 5 =$





のこりはいくつ？

◎ 10 から ひく ひきざん


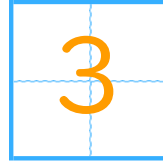


日にち：            月            日


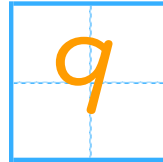
名まえ \_\_\_\_\_

・ ひきざんを しまししょう。(うすいじはなぞりまししょう。)

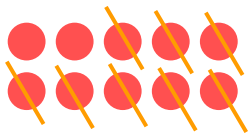
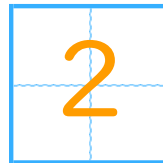
$$\textcircled{1} \quad 10 - 7 =$$




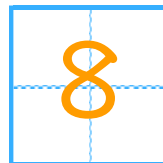
$$\textcircled{2} \quad 10 - 1 =$$




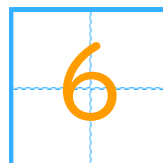
$$\textcircled{3} \quad 10 - 8 =$$



$$\textcircled{4} \quad 10 - 2 =$$



$$\textcircled{5} \quad 10 - 4 =$$





のこりはいくつ？

◎ 10 から ひく ひきざん



日にち：            月            日

名まえ \_\_\_\_\_

- ひきざんをしましょう。(うすいじはなぞりましょう。)

①  $10 - 3 =$ 

7
---

②  $10 - 1 =$ 

9
---

③  $10 - 5 =$ 

5
---

④  $10 - 6 =$ 

4
---

⑤  $10 - 8 =$ 

2
---





のこりはいくつ？

◎ 10 から ひく ひきざん

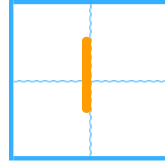


日にち：            月            日

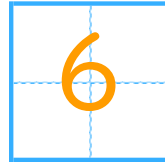
名まえ \_\_\_\_\_

- ・ ひきざんを しまししょう。(うすいじはなぞりまししょう。)

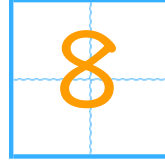
①  $10 - 9 =$



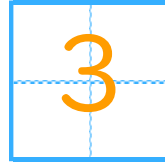
②  $10 - 4 =$



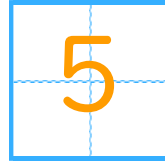
③  $10 - 2 =$



④  $10 - 7 =$



⑤  $10 - 5 =$





のこりはいくつ？

◎ 10 から ひく ひきざん

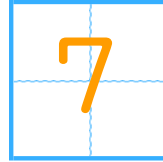


日にち：            月            日

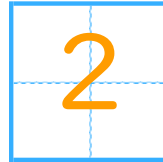
名まえ \_\_\_\_\_

・ ひきざんを しましょう。

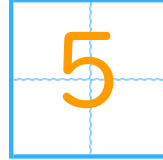
①  $10 - 3 =$



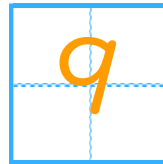
②  $10 - 8 =$



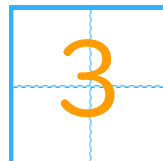
③  $10 - 5 =$



④  $10 - 1 =$



⑤  $10 - 7 =$





のこりはいくつ？

◎ 10 から ひく ひきざん

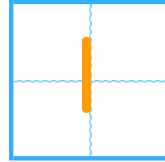


日にち：            月            日

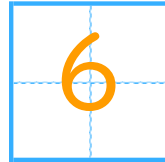
名まえ \_\_\_\_\_

・ ひきざんを しましょう。

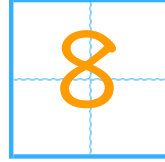
①  $10 - 9 =$



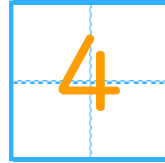
②  $10 - 4 =$



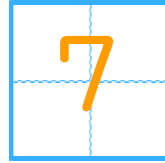
③  $10 - 2 =$



④  $10 - 6 =$



⑤  $10 - 3 =$







のこりはいくつ 9

◎ 10 から ひく ひきざん



日にち：            月            日

名まえ \_\_\_\_\_

・ ひきざんを しましょう。

①  $10 - 4 =$

6

②  $10 - 7 =$

3

③  $10 - 9 =$

1

④  $10 - 2 =$

8

⑤  $10 - 6 =$

4





のこりはいくつ？

● 10からひくひきざん

10

日にち：            月            日

名まえ \_\_\_\_\_

・ ひきざんをしましょう。

①  $10 - 6 =$

4

②  $8 - 7 =$

1

③  $6 - 3 =$

3

④  $4 - 2 =$

2

⑤  $5 - 1 =$

4

⑥  $10 - 4 =$

6





のこりはいくつ？

◎ 10からひくひきざん



日にち：            月            日

名まえ \_\_\_\_\_

・ ひきざんをしましょう。

①  $9 - 6 =$

3

②  $7 - 3 =$

4

③  $2 - 1 =$

1

④  $5 - 3 =$

2

⑤  $10 - 2 =$

8

⑥  $6 - 5 =$

1





のこりはいくつ？

● 10からひくひきざん

12

日にち：            月            日

名まえ \_\_\_\_\_

・ ひきざんをしましょう。

①  $8 - 3 =$

5

②  $9 - 4 =$

5

③  $5 - 2 =$

3

④  $10 - 3 =$

7

⑤  $6 - 2 =$

4

⑥  $7 - 1 =$

6





のこりはいくつ？

● 10からひくひきざん

13

日にち：            月            日

名まえ \_\_\_\_\_

・ ひきざんをしましょう。

①  $6 - 4 =$

2

②  $10 - 1 =$

9

③  $4 - 3 =$

1

④  $7 - 5 =$

2

⑤  $10 - 9 =$

1

⑥  $8 - 5 =$

3



のこりはいくつ？

● 10からひくひきざん

14

日にち：            月            日

名まえ \_\_\_\_\_

・ ひきざんをしましょう。

①  $8 - 1 =$

7

②  $5 - 4 =$

1

③  $7 - 6 =$

1

④  $10 - 8 =$

2

⑤  $9 - 2 =$

7

⑥  $10 - 5 =$

5






のこりはいくつ？

● 10からひくひきざん

15

めざせ80てん!



名まえ \_\_\_\_\_

・ ひきざんをしましょう。(各20点)

①  $10 - 7 =$

②  $7 - 2 =$

③  $3 - 1 =$

④  $9 - 3 =$

⑤  $8 - 4 =$




のこりはいくつ？

◎ 10 から ひく ひきざん

16

めざせ80てん!



名まえ \_\_\_\_\_

・ ひきざんを しましょう。(各20点)

①  $10 - 4 =$

6

②  $6 - 1 =$

5

③  $8 - 5 =$

3

④  $9 - 7 =$

2

⑤  $3 - 2 =$

1

