



くりさがりのある  
ひきざん 7

くりさがりのけいさん  
(2 から 9 をひく)

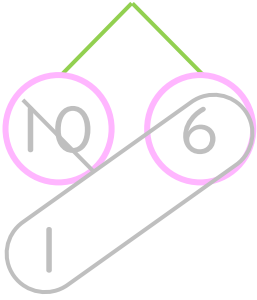


日にち： 月 日

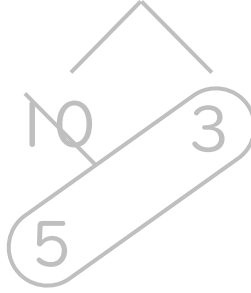
名まえ \_\_\_\_\_

・ けいさんをしましょう。(うすいじはなぞりましょう。)

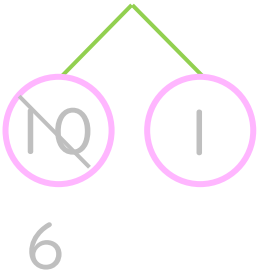
①  $16 - 9 = \boxed{7}$



⑤  $13 - 5 = \boxed{\phantom{00}}$



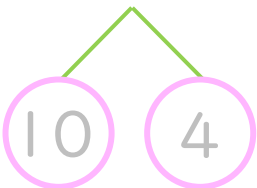
②  $11 - 4 = \boxed{\phantom{00}}$



⑥  $14 - 8 = \boxed{\phantom{00}}$



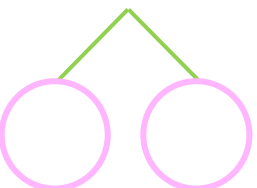
③  $14 - 6 = \boxed{\phantom{00}}$



⑦  $12 - 3 = \boxed{\phantom{00}}$



④  $11 - 2 = \boxed{\phantom{00}}$



⑧  $13 - 7 = \boxed{\phantom{00}}$





くりさがりのある  
ひきざん 7

くりさがりのけいさん  
(2 から 9 をひく)

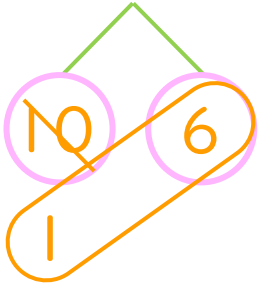


日にち： 月 日

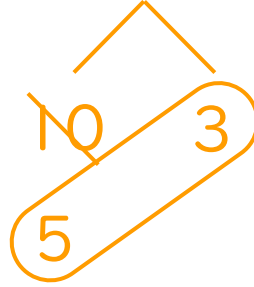
名まえ \_\_\_\_\_

・ けいさんをしましょう。(うすいじはなぞりましょう。)

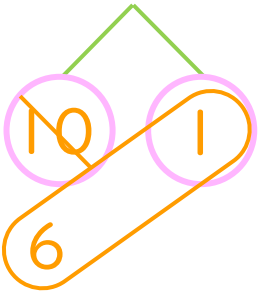
①  $16 - 9 = 7$



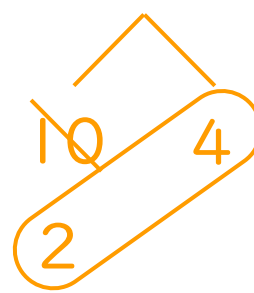
⑤  $13 - 5 = 8$



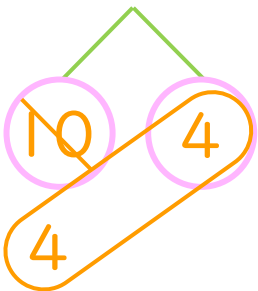
②  $11 - 4 = 7$



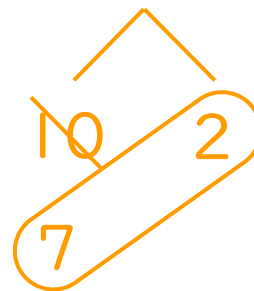
⑥  $14 - 8 = 6$



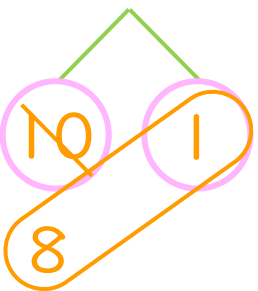
③  $14 - 6 = 8$



⑦  $12 - 3 = 9$



④  $11 - 2 = 9$



⑧  $13 - 7 = 6$

