



のこりはいくつ 8

ひきざんのけいさん

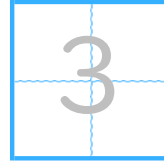


日にち： 月 日

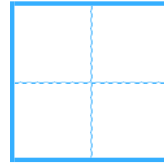
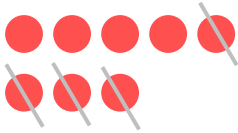
名まえ _____

- ひきざんをしましょう。(うすいじはなぞりましょう。)

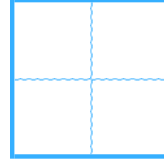
① $5 - 2 =$



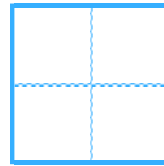
② $8 - 4 =$



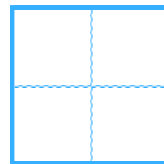
③ $7 - 1 =$



④ $4 - 2 =$



⑤ $9 - 8 =$





のこりはいくつ 8

ひきざんのけいさん

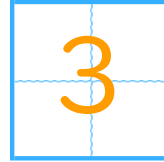


日にち： 月 日

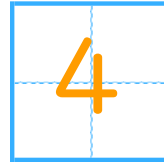
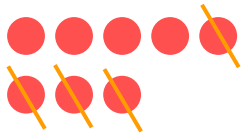
名まえ _____

- ひきざんをしまししょう。(うすいじはなぞりまししょう。)

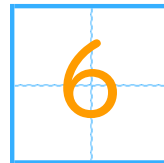

① $5 - 2 =$



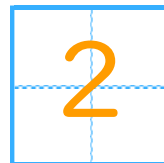
② $8 - 4 =$



③ $7 - 1 =$



④ $4 - 2 =$



⑤ $9 - 8 =$

