



# のこりはいくつ？

◎ 10からひくひきざん


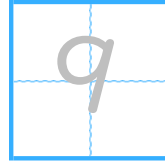


日にち：            月            日


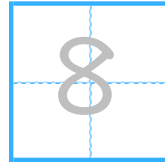
名まえ \_\_\_\_\_

・ ひきざんをしましょう。(うすいじはなぞりましょう。)

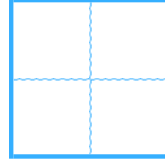
①  $10 - 1 =$



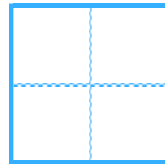
②  $10 - 2 =$



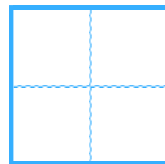
③  $10 - 3 =$



④  $10 - 4 =$



⑤  $10 - 5 =$





のこりはいくつ？

◎ 10 から ひく ひきざん


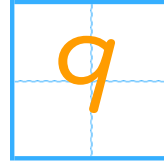


日にち：            月            日

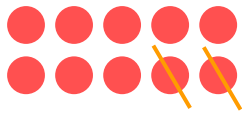
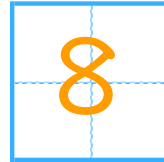
名まえ \_\_\_\_\_

・ ひきざんを しまししょう。(うすいじはなぞりまししょう。)

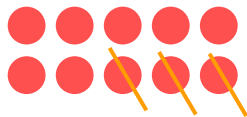
$$\textcircled{1} \quad 10 - 1 =$$




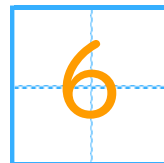
$$\textcircled{2} \quad 10 - 2 =$$



$$\textcircled{3} \quad 10 - 3 =$$



$$\textcircled{4} \quad 10 - 4 =$$



$$\textcircled{5} \quad 10 - 5 =$$

