



のこりはいくつ？

◎ 10 から ひく ひきざん




日にち： 月 日


名まえ _____

- ひきざんをしましょう。(うすいじはなぞりましょう。)

① $10 - 1 =$



② $10 - 2 =$



③ $10 - 3 =$



④ $10 - 4 =$



⑤ $10 - 5 =$





のこりはいくつ？

◎ 10 から ひく ひきざん




日にち： 月 日

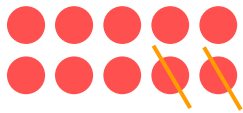
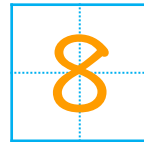
名まえ _____

・ ひきざんを しましょう。(うすいじはなぞりましょう。)


$$\textcircled{1} \quad 10 - 1 =$$




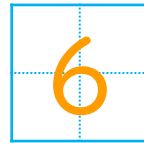
$$\textcircled{2} \quad 10 - 2 =$$



$$\textcircled{3} \quad 10 - 3 =$$



$$\textcircled{4} \quad 10 - 4 =$$



$$\textcircled{5} \quad 10 - 5 =$$

