



あわせていくつ？

◎ いろいろなかずのたしざん

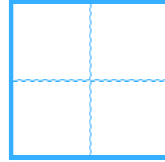


日にち： 月 日

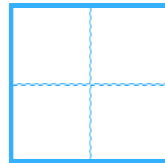
名まえ _____

・ たしざんをしましょう。

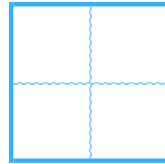
① $5 + 2 =$



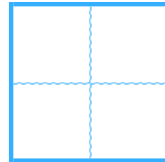
② $2 + 4 =$



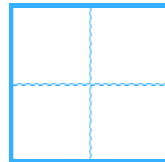
③ $6 + 1 =$



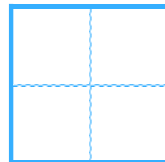
④ $3 + 6 =$



⑤ $8 + 2 =$



⑥ $4 + 4 =$





あわせていくつ？

◎ いろいろなかずのたしざん




日にち： 月 日

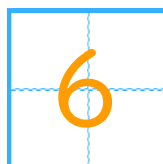
名まえ _____

・ たしざんをしましょう。

① $5 + 2 =$



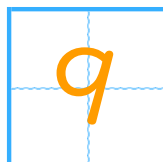
② $2 + 4 =$



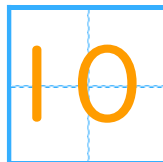
③ $6 + 1 =$



④ $3 + 6 =$



⑤ $8 + 2 =$



⑥ $4 + 4 =$

