



くりさがりのある  
ひきざん 4  
● くりさがりのけいさん  
(7をひく)

10

日にち：          月          日

名まえ \_\_\_\_\_

・ けいさんをしましょう。

①  $14 - 7 = \square$

⑤  $12 - 8 = \square$

②  $11 - 7 = \square$

⑥  $15 - 7 = \square$

③  $15 - 8 = \square$

⑦  $12 - 7 = \square$

④  $13 - 7 = \square$

⑧  $16 - 8 = \square$



くりさがりのある  
ひきざん 4  
● くりさがりのけいさん  
(7をひく)

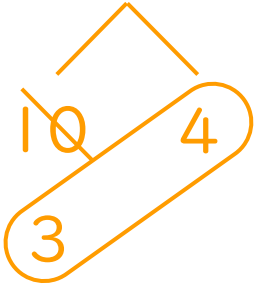


日にち：            月            日

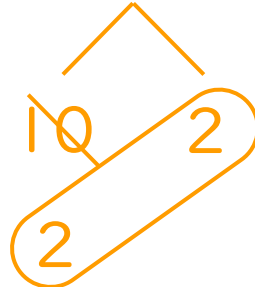
名まえ \_\_\_\_\_

・ けいさんをしましょう。

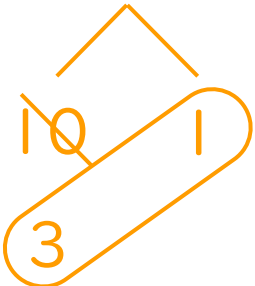
①  $14 - 7 = 7$



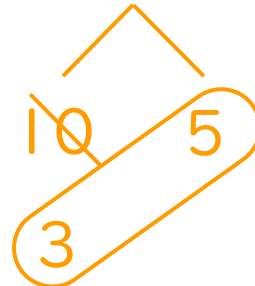
⑤  $12 - 8 = 4$



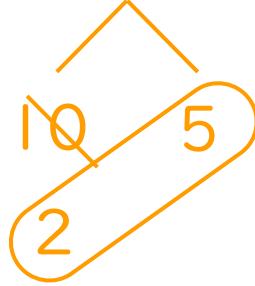
②  $11 - 7 = 4$



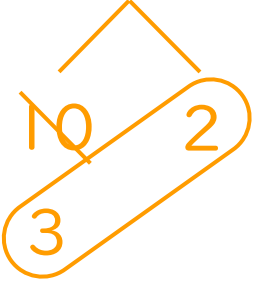
⑥  $15 - 7 = 8$



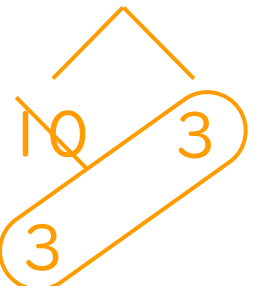
③  $15 - 8 = 7$



⑦  $12 - 7 = 5$



④  $13 - 7 = 6$



⑧  $16 - 8 = 8$

