



くりさがりのある
ひきざん 3

● くりさがりのけいさん
(8をひく)

10

日にち： 月 日

名まえ _____

・ けいさんをしましょう。

① $17 - 8 = \square$

⑤ $12 - 9 = \square$

② $11 - 8 = \square$

⑥ $15 - 8 = \square$

③ $14 - 8 = \square$

⑦ $11 - 9 = \square$

④ $13 - 9 = \square$

⑧ $16 - 8 = \square$



くりさがりのある
ひきざん 3

● くりさがりのけいさん
(8をひく)

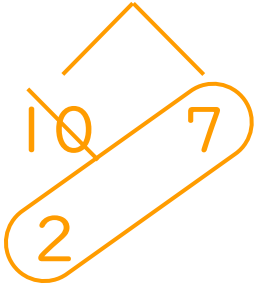


日にち： 月 日

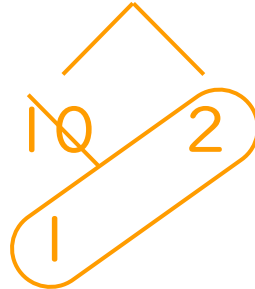
名まえ _____

・ けいさんをしましょう。

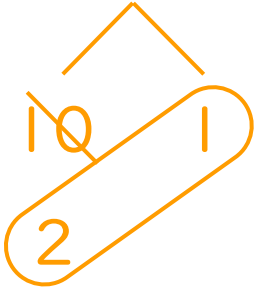
① $17 - 8 = 9$



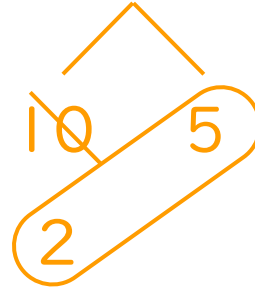
⑤ $12 - 9 = 3$



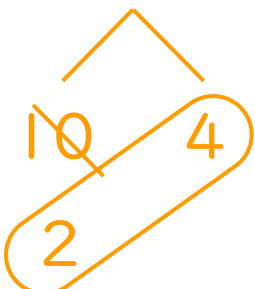
② $11 - 8 = 3$



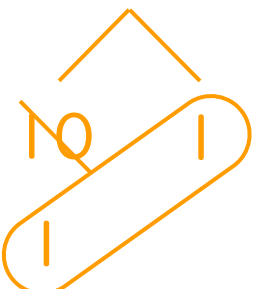
⑥ $15 - 8 = 7$



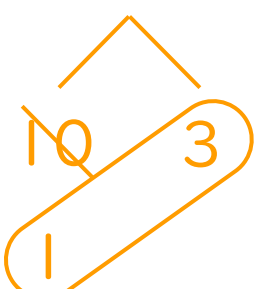
③ $14 - 8 = 6$



⑦ $11 - 9 = 2$



④ $13 - 9 = 4$



⑧ $16 - 8 = 8$

