



くりさがりのある  
ひきざん 2

● くりさがりのけいさん  
(9をひく)

10

日にち：          月          日

名まえ \_\_\_\_\_

・ けいさんをしましょう。

①  $17 - 9 = \square$

⑤  $12 - 9 = \square$

②  $11 - 9 = \square$

⑥  $15 - 9 = \square$

③  $14 - 9 = \square$

⑦  $18 - 9 = \square$

④  $13 - 9 = \square$

⑧  $16 - 9 = \square$



くりさがりのある  
ひきざん 2

● くりさがりのけいさん  
(9をひく)

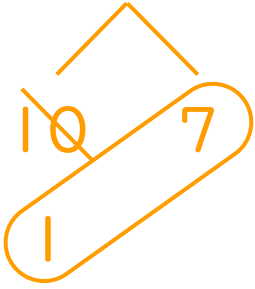


日にち：            月            日

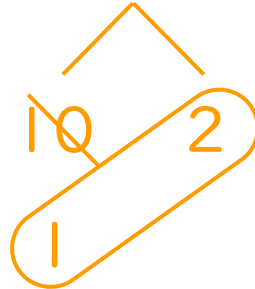
名まえ \_\_\_\_\_

・ けいさんをしましょう。

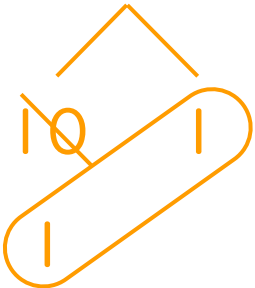
①  $17 - 9 = 8$



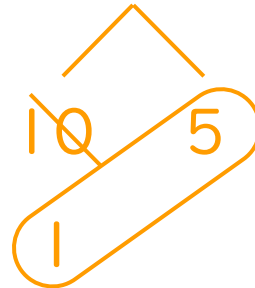
⑤  $12 - 9 = 3$



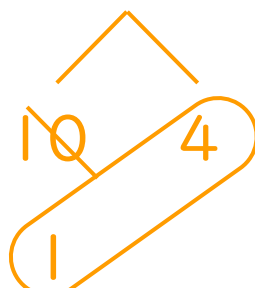
②  $11 - 9 = 2$



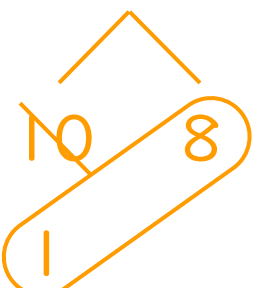
⑥  $15 - 9 = 6$



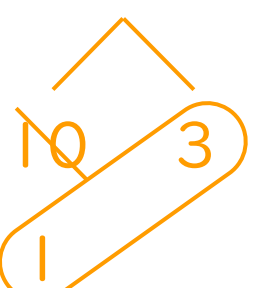
③  $14 - 9 = 5$



⑦  $18 - 9 = 9$



④  $13 - 9 = 4$



⑧  $16 - 9 = 7$

