



くりさがりのある  
ひきざん 2

● くりさがりの けいさん  
(9 をひく)



日にち：            月            日

名まえ \_\_\_\_\_

・ けいさんを しましょう。

①  $11 - 9 = \square$

⑤  $18 - 9 = \square$

②  $17 - 9 = \square$

⑥  $12 - 9 = \square$

③  $16 - 9 = \square$

⑦  $15 - 9 = \square$

④  $14 - 9 = \square$

⑧  $13 - 9 = \square$



くりさがりのある  
ひきざん 2

● くりさがりのけいさん  
(9をひく)

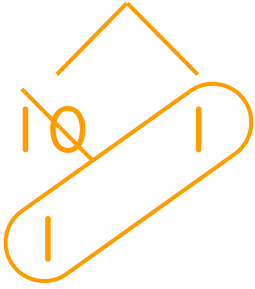


日にち：            月            日

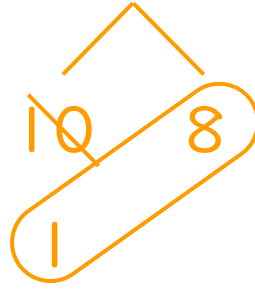
名まえ \_\_\_\_\_

・ けいさんをしましょう。

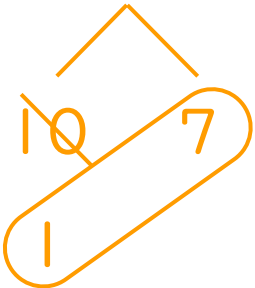
①  $11 - 9 = 2$



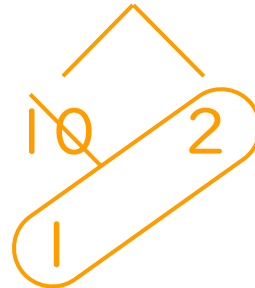
⑤  $18 - 9 = 9$



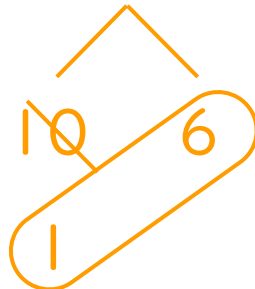
②  $17 - 9 = 8$



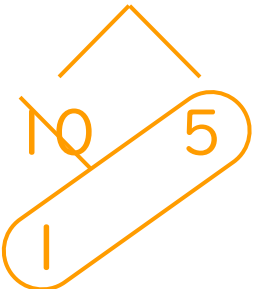
⑥  $12 - 9 = 3$




③  $16 - 9 = 7$



⑦  $15 - 9 = 6$



④  $14 - 9 = 5$



⑧  $13 - 9 = 4$

