



のこりはいくつ 8

● ひきざんの けいさん

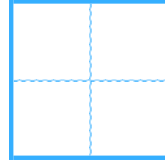
13

日にち： 月 日

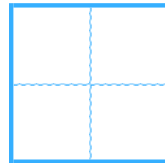
名まえ _____

・ ひきざんを しましう。

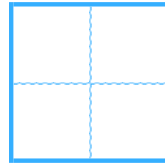
① $4 - 3 =$



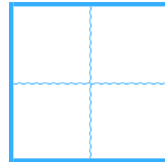
② $3 - 2 =$



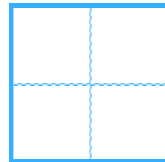
③ $9 - 6 =$



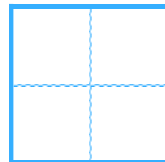
④ $7 - 4 =$



⑤ $6 - 5 =$



⑥ $8 - 1 =$





のこりはいくつ 8

● ひきざんの けいさん

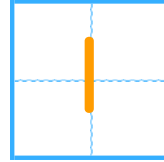
13

日にち： 月 日

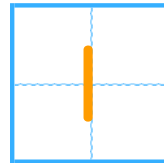
名まえ _____

・ ひきざんを しましょう。

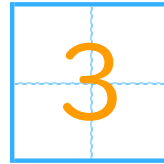
① $4 - 3 =$



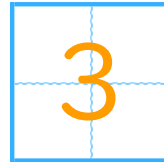
② $3 - 2 =$



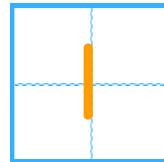
③ $9 - 6 =$



④ $7 - 4 =$



⑤ $6 - 5 =$



⑥ $8 - 1 =$

