



のこりはいくつ 8

● ひきざんの けいさん


13

日にち：            月            日

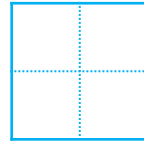
名まえ \_\_\_\_\_

・ ひきざんを しましう。

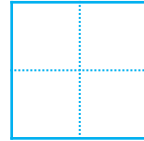
①  $4 - 3 =$



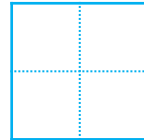
②  $3 - 2 =$




③  $9 - 6 =$



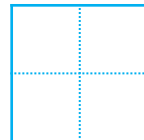
④  $7 - 4 =$



⑤  $6 - 5 =$



⑥  $8 - 1 =$





のこりはいくつ 8

● ひきざんの けいさん

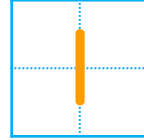
13

日にち：            月            日

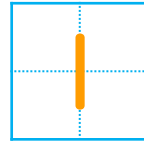
名まえ \_\_\_\_\_

・ ひきざんを しましょう。

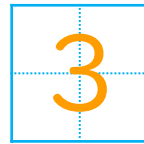
①  $4 - 3 =$



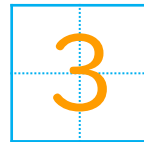
②  $3 - 2 =$



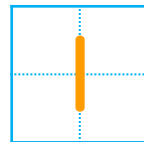
③  $9 - 6 =$



④  $7 - 4 =$



⑤  $6 - 5 =$



⑥  $8 - 1 =$

