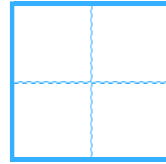


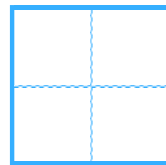


・ たしざんをしましょう。

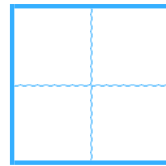
①  $0 + 0 =$



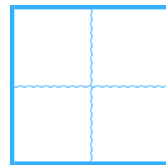
②  $4 + 3 =$



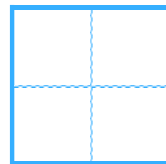
③  $2 + 0 =$



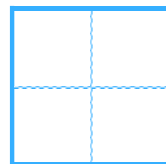
④  $7 + 1 =$



⑤  $0 + 5 =$



⑥  $6 + 4 =$





・ たしざんをしましょう。

①  $0 + 0 =$

0
---

②  $4 + 3 =$

7
---

③  $2 + 0 =$

2
---

④  $7 + 1 =$

8
---

⑤  $0 + 5 =$

5
---

⑥  $6 + 4 =$

10
----

