



くりさがりのある
ひきざん 6

● くりさがりのけいさん
(4や3をひく)

14

日にち： 月 日

名まえ _____

・ けいさんをしましょう。

① $11 - 3 = \square$

⑤ $12 - 3 = \square$

② $12 - 5 = \square$

⑥ $12 - 4 = \square$

③ $13 - 4 = \square$

⑦ $14 - 6 = \square$

④ $15 - 6 = \square$

⑧ $11 - 4 = \square$



くりさがりのある
ひきざん 6

● くりさがりのけいさん
(4や3をひく)

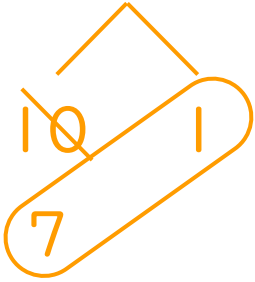
14

日にち： 月 日

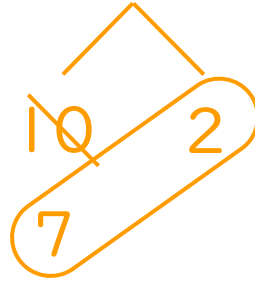
名まえ _____

・ けいさんをしましょう。

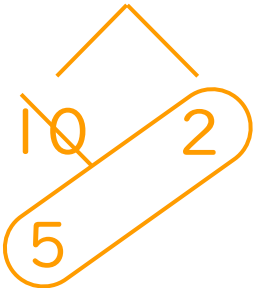
① $11 - 3 = 8$



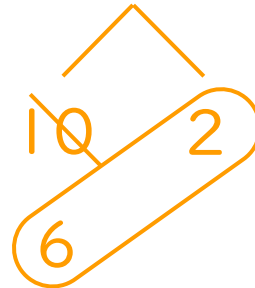
⑤ $12 - 3 = 9$



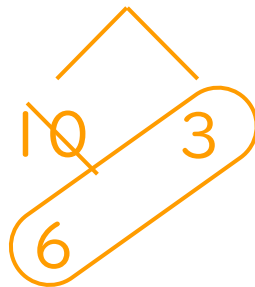
② $12 - 5 = 7$



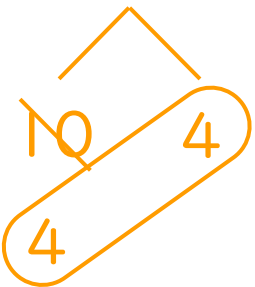
⑥ $12 - 4 = 8$



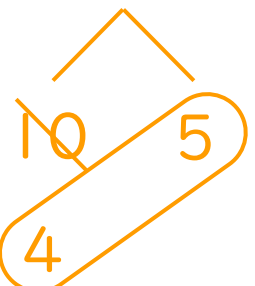
③ $13 - 4 = 9$



⑦ $14 - 6 = 8$



④ $15 - 6 = 9$



⑧ $11 - 4 = 7$

