



くりさがりのある  
ひきざん 2

● くりさがりの けいさん  
(9 をひく)

14

日にち：            月            日

名まえ \_\_\_\_\_

・ けいさんをしましょう。

①  $17 - 9 = \square$

⑤  $14 - 9 = \square$

②  $13 - 9 = \square$

⑥  $18 - 9 = \square$

③  $16 - 9 = \square$

⑦  $12 - 9 = \square$

④  $11 - 9 = \square$

⑧  $15 - 9 = \square$



くりさがりのある  
ひきざん 2

● くりさがりのけいさん  
(9をひく)

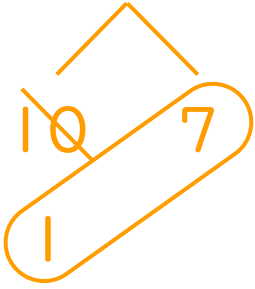
14

日にち：      月      日

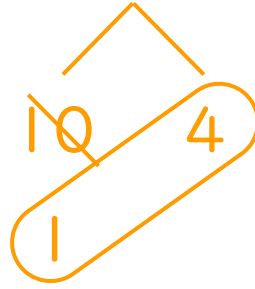
名まえ \_\_\_\_\_

・ けいさんをしましょう。

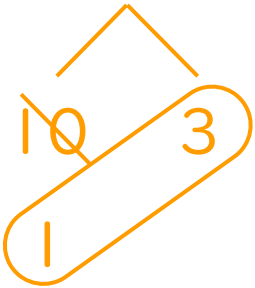
①  $17 - 9 = 8$



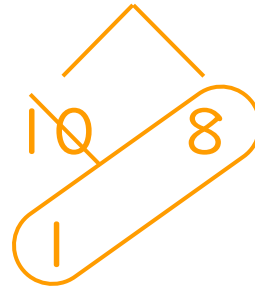
⑤  $14 - 9 = 5$



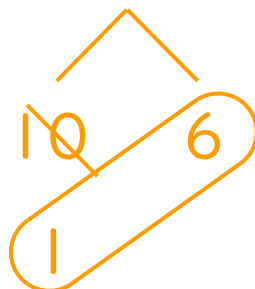
②  $13 - 9 = 4$




⑥  $18 - 9 = 9$



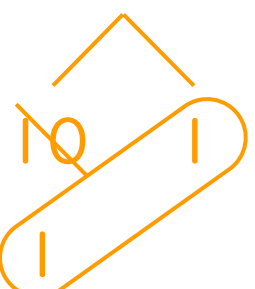
③  $16 - 9 = 7$



⑦  $12 - 9 = 3$



④  $11 - 9 = 2$



⑧  $15 - 9 = 6$

