




あわせていくつ？

いろいろなかずのたしざん

15

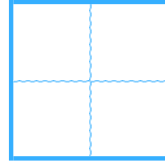
めざせ80てん!



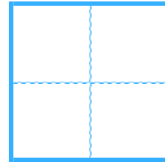
名まえ \_\_\_\_\_

・ たしざんをしましょう。(各20点)

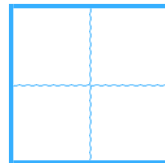
①  $7 + 2 =$



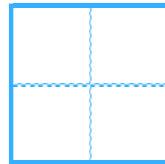
②  $1 + 5 =$



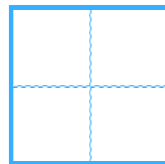
③  $9 + 1 =$



④  $2 + 2 =$



⑤  $5 + 3 =$






あわせていくつ？

● いろいろなかずのたしざん

15

めざせ80てん!



名まえ \_\_\_\_\_

・ たしざんをしましょう。(各20点)

①  $7 + 2 =$ 

9
---

②  $1 + 5 =$ 

6
---

③  $9 + 1 =$ 

10
----

④  $2 + 2 =$ 

4
---

⑤  $5 + 3 =$ 

8
---

