




くりさがりのある
ひきざん 6

● くりさがりのけいさん
(4や3をひく)

15

めざせ80点!



名まえ _____

・ けいさんをしましょう。(各20点)

① $12 - 4 =$

② $11 - 5 =$

③ $12 - 3 =$

④ $13 - 4 =$

⑤ $11 - 6 =$




くりさがりのある
ひきざん 6

● くりさがりのけいさん
(4や3をひく)

15

めざせ80点!

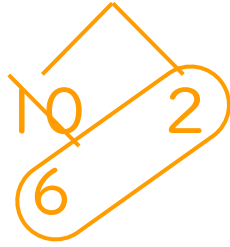


名まえ _____

・ けいさんをしましょう。(各20点)

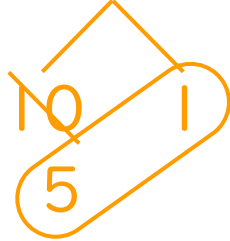
① $12 - 4 =$

8



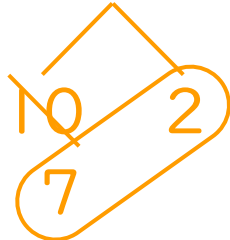
② $11 - 5 =$

6



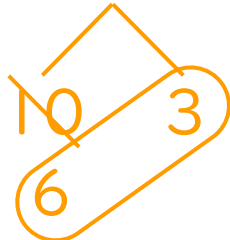
③ $12 - 3 =$

9



④ $13 - 4 =$

9



⑤ $11 - 6 =$

5

