




のこりはいくつ 8

● ひきざんの けいさん

15

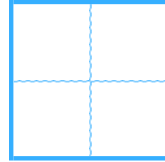
めざせ80てん!



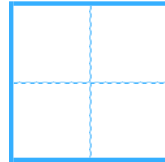
名まえ _____

・ ひきざんを しましょう。(各20点)

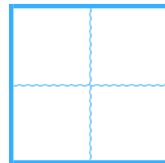
① $9 - 7 =$



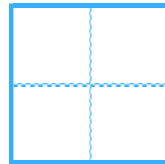
② $4 - 2 =$



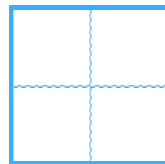
③ $6 - 3 =$



④ $7 - 2 =$



⑤ $8 - 2 =$






のこりはいくつ 8

● ひきざんの けいさん

15

めざせ80てん!



名まえ _____

・ ひきざんを しまししょう。(各20点)

① $9 - 7 =$

② $4 - 2 =$

③ $6 - 3 =$

④ $7 - 2 =$

⑤ $8 - 2 =$