




のこりはいくつ 10

15

● 0のひきざん

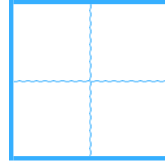
めざせ80てん!



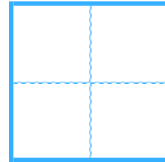
名まえ _____

・ ひきざんをしましょう。(各20点)

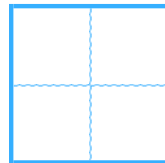
① $10 - 8 =$



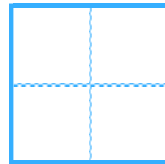
② $7 - 3 =$



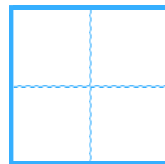
③ $3 - 0 =$



④ $0 - 0 =$



⑤ $4 - 4 =$






のこりはいくつ 10

15

● 0のひきざん

めざせ80てん!



名まえ _____

・ ひきざんをしましょう。(各20点)

① $10 - 8 =$

2

② $7 - 3 =$

4

③ $3 - 0 =$

3

④ $0 - 0 =$

0

⑤ $4 - 4 =$

0