




あわせていくつ8

15

● 0のたしざん

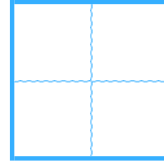
めざせ80てん!



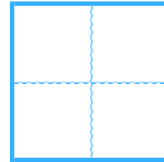
名まえ _____

・ たしざんをしましょう。(各20点)

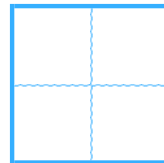
① $7 + 0 =$



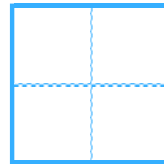
② $2 + 3 =$



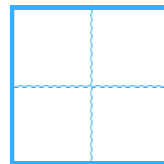
③ $0 + 1 =$



④ $6 + 4 =$



⑤ $5 + 0 =$






あわせていくつ8

● 0のたしざん

15

めざせ80てん!



名まえ _____

・ たしざんをしましょう。(各20点)

① $7 + 0 =$

7

② $2 + 3 =$

5

③ $0 + 1 =$

1

④ $6 + 4 =$

10

⑤ $5 + 0 =$

5

