



あわせていくつ6

● 1, 2, 3 にたすれんしゅう

15

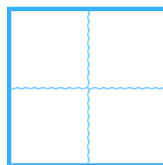
めざせ80てん!



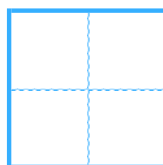
名まえ _____

・ たしざんを しましょう。(各20点)

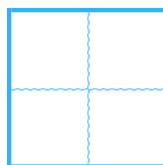
① $3 + 6 =$



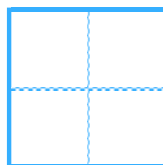
② $2 + 8 =$



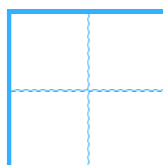
③ $1 + 4 =$



④ $2 + 3 =$



⑤ $3 + 5 =$





あわせていくつ6

● 1, 2, 3にたすれんしゅう

15

めざせ80てん!



名まえ _____

・ たしざんを しましょう。(各20点)

① $3 + 6 =$

9

② $2 + 8 =$

10

③ $1 + 4 =$

5

④ $2 + 3 =$

5

⑤ $3 + 5 =$

8

