



くりさがりのある
ひきざん 3

● くりさがりの けいさん
(8 をひく)

16

めざせ80点!



名まえ _____

・ けいさんをしましょう。(各20点)

① $17 - 8 =$

② $11 - 9 =$

③ $13 - 8 =$

④ $18 - 9 =$


⑤ $16 - 8 =$



くりさがりのある
ひきざん 3
● くりさがりの けいさん
(8 をひく)

16

めざせ80点!

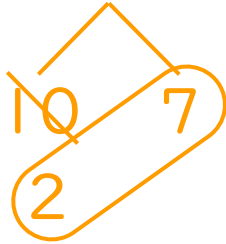


名まえ _____

・ けいさんをしましょう。(各20点)

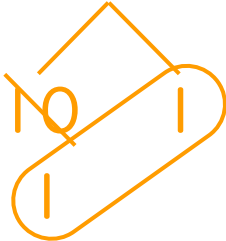
① $17 - 8 =$

9



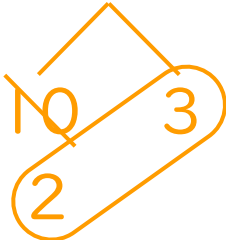
② $11 - 9 =$

2



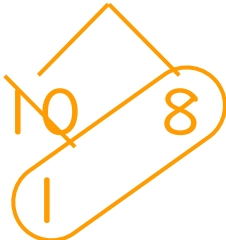
③ $13 - 8 =$

5



④ $18 - 9 =$

9



⑤ $16 - 8 =$

8

