




のこりはいくつ 8

● ひきざんの けいさん

16

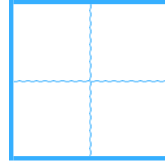
めざせ80てん!



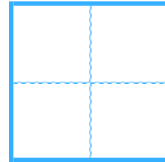
名まえ _____

・ ひきざんを しましょう。(各20点)

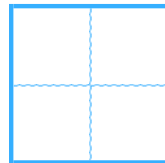
① $8 - 2 =$



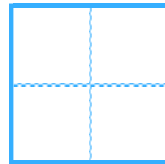
② $9 - 1 =$



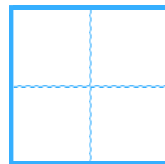
③ $6 - 4 =$



④ $7 - 6 =$



⑤ $6 - 3 =$






のこりはいくつ 8

● ひきざんの けいさん

16

めざせ80てん!



名まえ _____

・ ひきざんを しましょう。(各20点)

① $8 - 2 =$

6

② $9 - 1 =$

8

③ $6 - 4 =$

2

④ $7 - 6 =$

1

⑤ $6 - 3 =$

3
