




のこりはいくつ 10

16

◎ 0のひきざん


めざせ80てん!



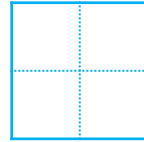
名まえ \_\_\_\_\_

・ ひきざんをしましょう。(各20点)

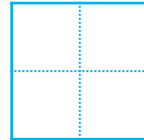
①  $10 - 4 =$



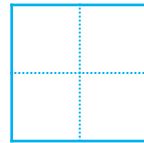
②  $5 - 5 =$



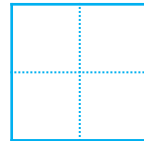
③  $4 - 0 =$



④  $8 - 6 =$



⑤  $3 - 3 =$






のこりはいくつ 10

16

● 0のひきざん

めざせ80てん!



名まえ \_\_\_\_\_

・ ひきざんをしましょう。(各20点)

①  $10 - 4 =$

②  $5 - 5 =$

③  $4 - 0 =$

④  $8 - 6 =$

⑤  $3 - 3 =$