




のこりはいくつ？

◎ 10 から ひく ひきざん

16

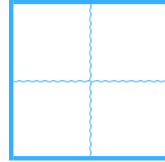
めざせ80てん!



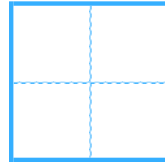
名まえ _____

・ ひきざんを しましょう。(各20点)

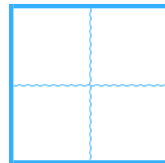
① $10 - 4 =$



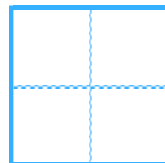
② $6 - 1 =$



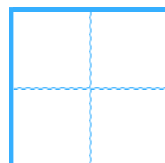
③ $8 - 5 =$



④ $9 - 7 =$



⑤ $3 - 2 =$






のこりはいくつ？

◎ 10 から ひく ひきざん

16

めざせ80てん!



名まえ _____

・ ひきざんを しましょう。(各20点)

① $10 - 4 =$

6

② $6 - 1 =$

5

③ $8 - 5 =$

3

④ $9 - 7 =$

2

⑤ $3 - 2 =$

1

