



のこりはいくつ 8

ひきざんの けいさん

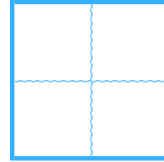
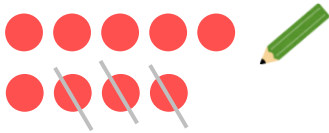


日にち： 月 日

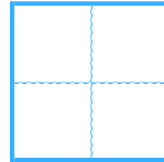
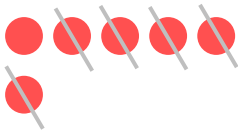
名まえ _____

- ひきざんを しまししょう。(うすいじはなぞりまししょう。)

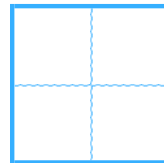
① $9 - 3 =$



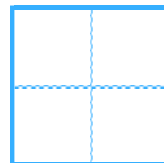
② $6 - 5 =$



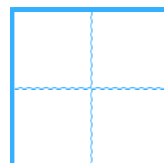
③ $3 - 1 =$



④ $8 - 2 =$



⑤ $7 - 4 =$





のこりはいくつ 8

ひきざんの けいさん

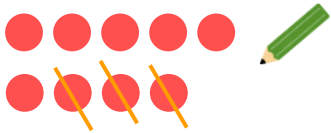
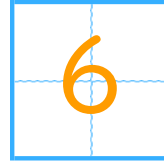


日にち： 月 日

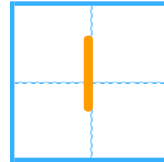
名まえ _____

- ひきざんを しまししょう。(うすいじは なぞりまししょう。)

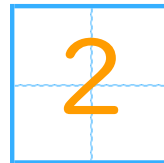
① $9 - 3 =$




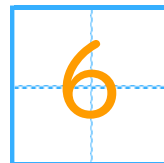
② $6 - 5 =$



③ $3 - 1 =$



④ $8 - 2 =$



⑤ $7 - 4 =$

