



のこりはいくつ？

◎ 10 から ひく ひきざん

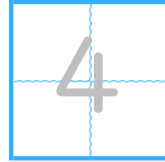
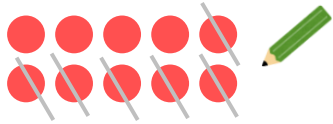
2

日にち：            月            日

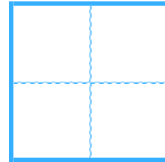
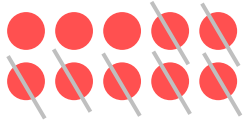
名まえ \_\_\_\_\_

- ひきざんを しまししょう。(うすいじはなぞりまししょう。)

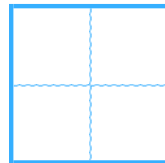
①  $10 - 6 =$



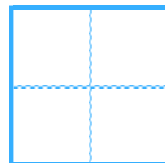
②  $10 - 7 =$



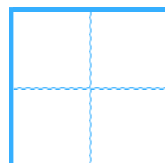
③  $10 - 8 =$



④  $10 - 9 =$



⑤  $10 - 1 =$





のこりはいくつ？

◎ 10 から ひく ひきざん

2


日にち： 月 日

名まえ \_\_\_\_\_

・ ひきざんを しましょう。(うすいじはなぞりましょう。)


$$\textcircled{1} 10 - 6 =$$

4




$$\textcircled{2} 10 - 7 =$$

3




$$\textcircled{3} 10 - 8 =$$

2



$$\textcircled{4} 10 - 9 =$$

1



$$\textcircled{5} 10 - 1 =$$

9

