



のこりはいくつ 8

ひきざんの けいさん

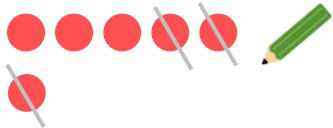
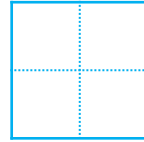


日にち： 月 日


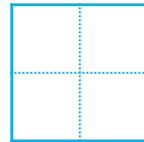
名まえ _____

- ひきざんを しましよう。(うすいところはなぞりましよう。)


① $6 - 3 =$




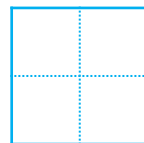
② $8 - 5 =$



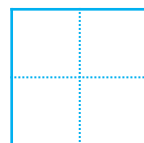
③ $5 - 4 =$



④ $9 - 7 =$



⑤ $7 - 2 =$





のこりはいくつ 8

ひきざんの けいさん

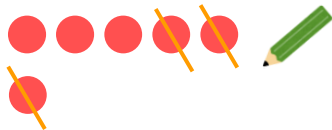
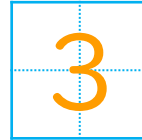


日にち： 月 日

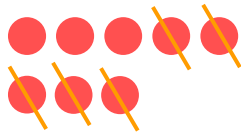
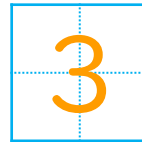
名まえ _____

- ひきざんを しましう。 (うすいところは なぞりましう。)

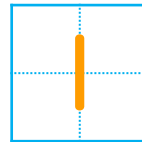
① $6 - 3 =$




② $8 - 5 =$



③ $5 - 4 =$



④ $9 - 7 =$



⑤ $7 - 2 =$

