



のこりはいくつ？

◎ 10 から ひく ひきざん

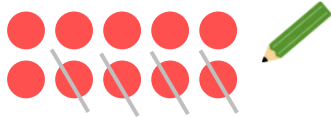
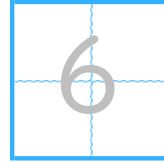


日にち： 月 日

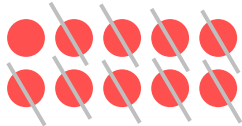
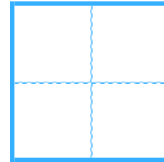
名まえ _____

- ・ ひきざんを しましょう。(うすいじはなぞりましょう。)


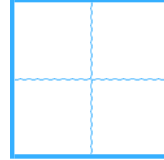
① $10 - 4 =$



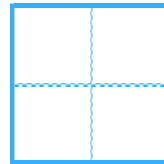
② $10 - 9 =$



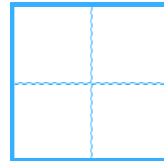
③ $10 - 3 =$



④ $10 - 6 =$



⑤ $10 - 5 =$





のこりはいくつ？

◎ 10 から ひく ひきざん


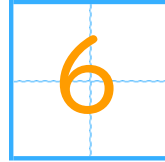


日にち： 月 日


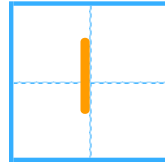
名まえ _____

・ ひきざんを しまししょう。(うすいじはなぞりまししょう。)

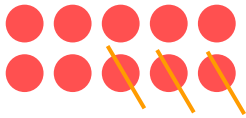
① $10 - 4 =$




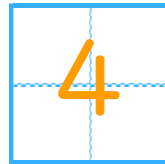
② $10 - 9 =$



③ $10 - 3 =$



④ $10 - 6 =$



⑤ $10 - 5 =$

