



のこりはいくつ？

◎ 10 から ひく ひきざん



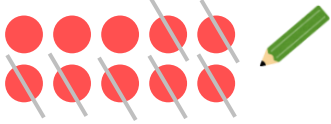
日にち： 月 日

名まえ _____

・ ひきざんを しまししょう。(うすいじはなぞりまししょう。)


① $10 - 7 =$

3



② $10 - 1 =$

--



③ $10 - 8 =$

--



④ $10 - 2 =$

--



⑤ $10 - 4 =$

--





のこりはいくつ？

◎ 10 から ひく ひきざん

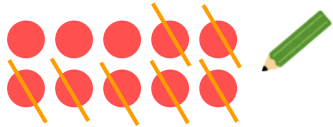
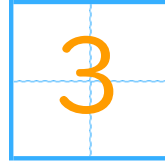


日にち： 月 日


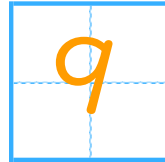
名まえ _____

- ひきざんを しましょう。(うすいじはなぞりましょう。)

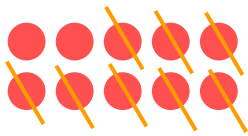
$$\textcircled{1} \quad 10 - 7 =$$




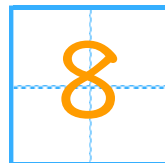
$$\textcircled{2} \quad 10 - 1 =$$



$$\textcircled{3} \quad 10 - 8 =$$



$$\textcircled{4} \quad 10 - 2 =$$



$$\textcircled{5} \quad 10 - 4 =$$

