



くりさがりのある
ひきざん 5

● くりさがりのけいさん
(6や5をひく)

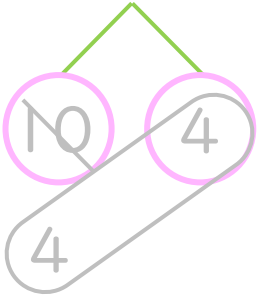


日にち： 月 日

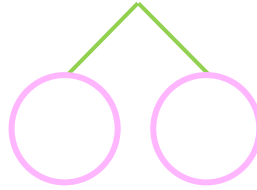
名まえ _____

・ けいさんをしましょう。(うすいじはなぞりましょう。)

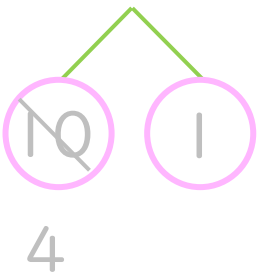
① $14 - 6 = \square$



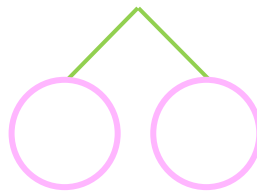
⑤ $11 - 5 = \square$



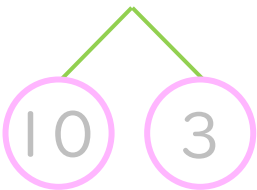
② $11 - 6 = \square$



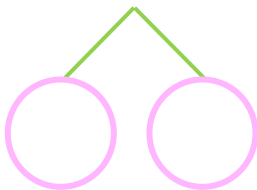
⑥ $14 - 5 = \square$



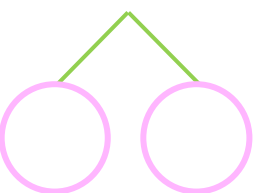
③ $13 - 6 = \square$



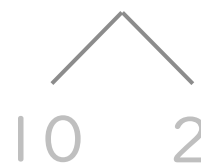
⑦ $13 - 5 = \square$



④ $12 - 6 = \square$



⑧ $12 - 5 = \square$





くりさがりのある
ひきざん 5

● くりさがりのけいさん
(6や5をひく)

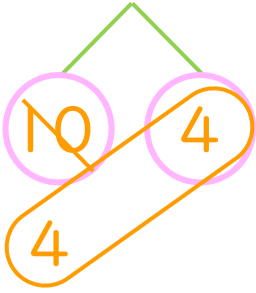


日にち： 月 日

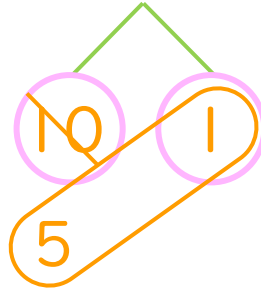
名まえ _____

・ けいさんをしましょう。(うすいじはなぞりましょう。)

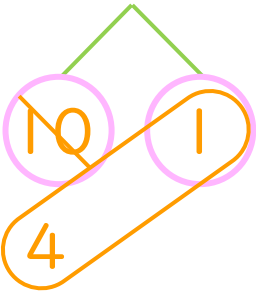
① $14 - 6 = 8$



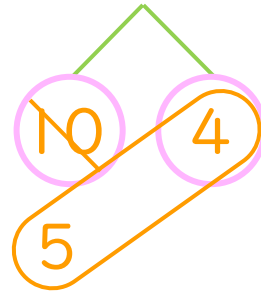
⑤ $11 - 5 = 6$



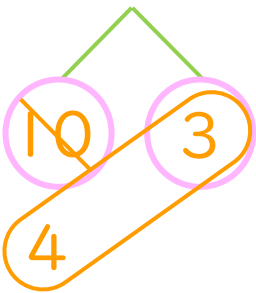
② $11 - 6 = 5$



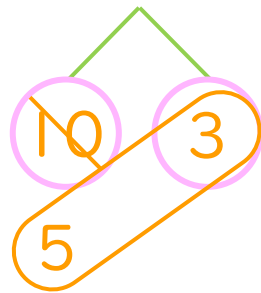
⑥ $14 - 5 = 9$



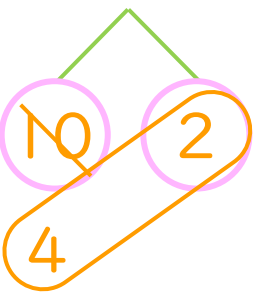
③ $13 - 6 = 7$



⑦ $13 - 5 = 8$



④ $12 - 6 = 6$



⑧ $12 - 5 = 7$

