



くりさがりのある
ひきざん 4
● くりさがりのけいさん
(7をひく)

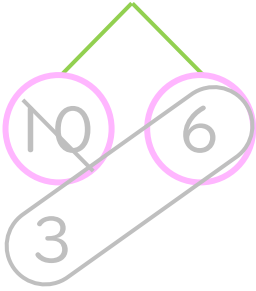


日にち： 月 日

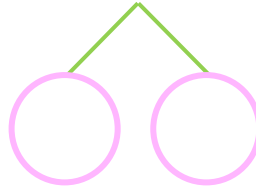
名まえ _____

・ けいさんをしましょう。(うすいじはなぞりましょう。)

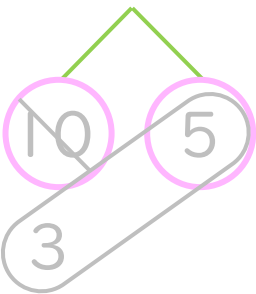
① $16 - 7 = \square$



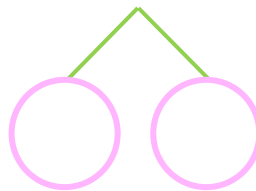
⑤ $11 - 7 = \square$



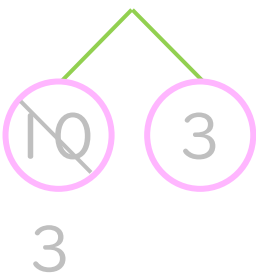
② $15 - 7 = \square$



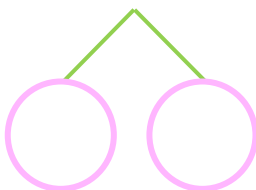
⑥ $14 - 7 = \square$



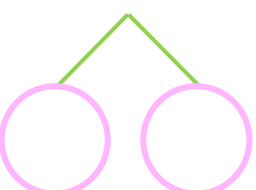
③ $13 - 7 = \square$



⑦ $16 - 7 = \square$



④ $12 - 7 = \square$



⑧ $15 - 7 = \square$





くりさがりのある
ひきざん 4
● くりさがりのけいさん
(7をひく)

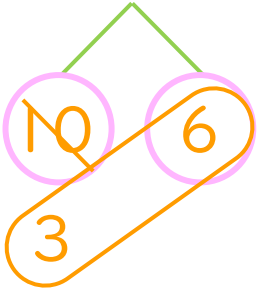


日にち： 月 日

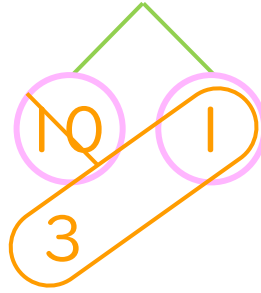
名まえ _____

・ けいさんをしましょう。(うすいじはなぞりましょう。)

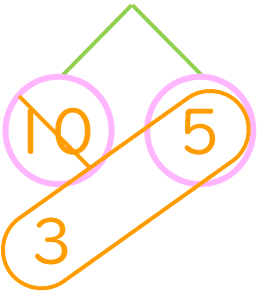
① $16 - 7 = 9$



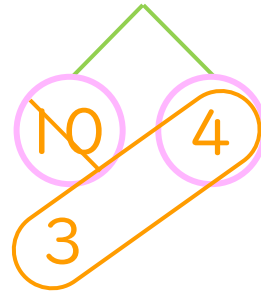
⑤ $11 - 7 = 4$



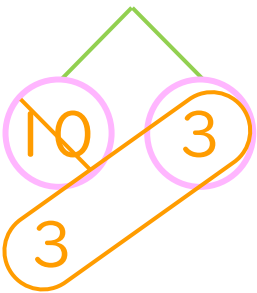
② $15 - 7 = 8$



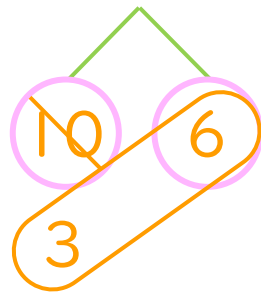
⑥ $14 - 7 = 7$



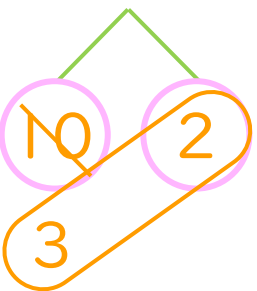
③ $13 - 7 = 6$



⑦ $16 - 7 = 9$



④ $12 - 7 = 5$



⑧ $15 - 7 = 8$

