



くりさがりのある
ひきざん 2

● くりさがりのけいさん
(9をひく)

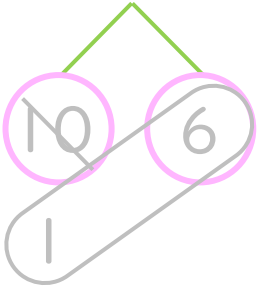


日にち： 月 日

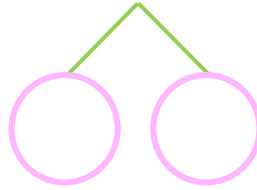
名まえ _____

・ けいさんをしましょう。(うすいじはなぞりましょう。)

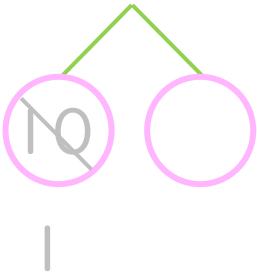
① $16 - 9 = \square$



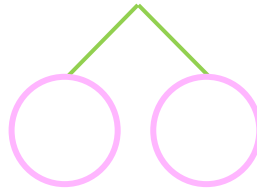
⑤ $11 - 9 = \square$



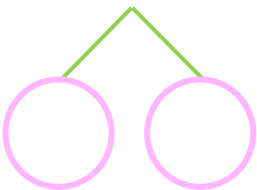
② $18 - 9 = \square$



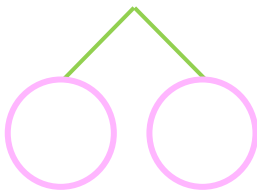
⑥ $14 - 9 = \square$



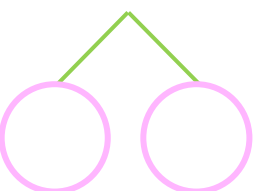
③ $13 - 9 = \square$



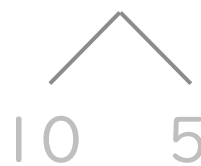
⑦ $17 - 9 = \square$



④ $12 - 9 = \square$



⑧ $15 - 9 = \square$





くりさがりのある
ひきざん 2

● くりさがりのけいさん
(9をひく)

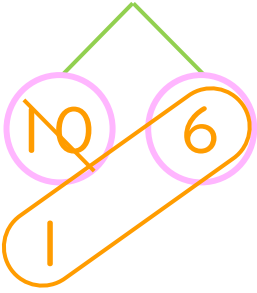


日にち： 月 日

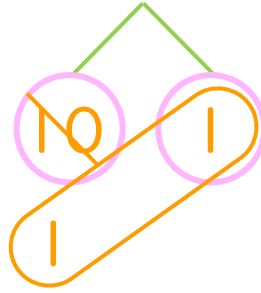
名まえ _____

・ けいさんをしましょう。(うすいじはなぞりましょう。)

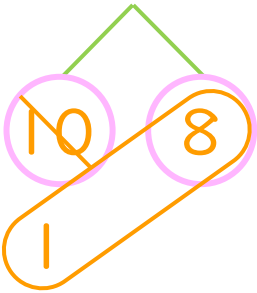
① $16 - 9 = 7$



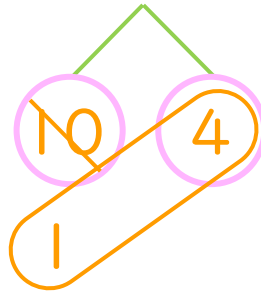
⑤ $11 - 9 = 2$



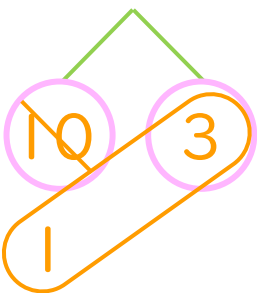
② $18 - 9 = 9$



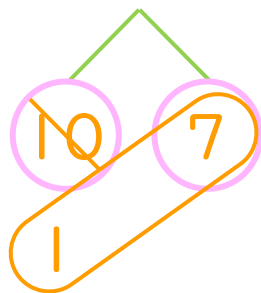
⑥ $14 - 9 = 5$



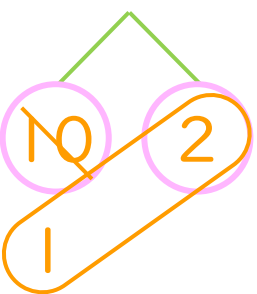
③ $13 - 9 = 4$



⑦ $17 - 9 = 8$



④ $12 - 9 = 3$



⑧ $15 - 9 = 6$

