



くりあがりのある
たしざん 3

● くりあがりのけいさん
(8 とたす)

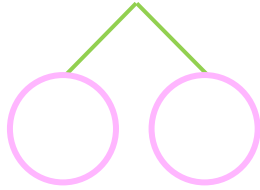


日にち： 月 日

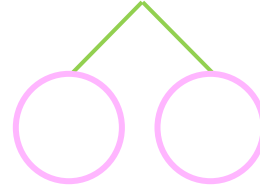
名まえ _____

・ けいさんをしましょう。

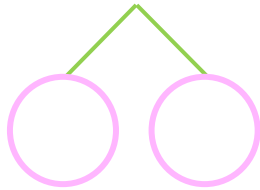
① $8 + 7 = \square$



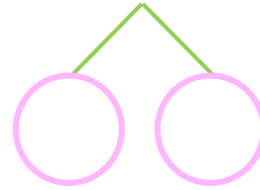
⑤ $8 + 8 = \square$



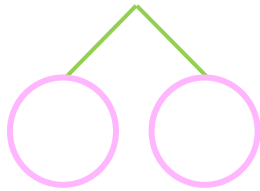
② $8 + 9 = \square$



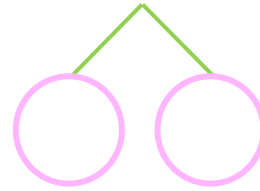
⑥ $8 + 4 = \square$



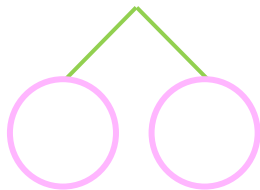
③ $8 + 5 = \square$



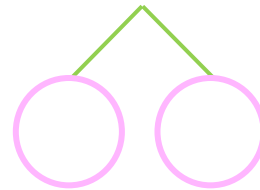
⑦ $8 + 3 = \square$



④ $8 + 4 = \square$



⑧ $8 + 6 = \square$





くりあがりのある
たしざん 3

● くりあがりのけいさん
(8 とたす)



日にち： 月 日

名まえ _____

・ けいさんをしましょう。

① $8 + 7 = 15$
10 (2) (5)

⑤ $8 + 8 = 16$
10 (2) (6)

② $8 + 9 = 17$
10 (2) (7)

⑥ $8 + 4 = 12$
10 (2) (2)

③ $8 + 5 = 13$
10 (2) (3)

⑦ $8 + 3 = 11$
10 (2) (1)

④ $8 + 4 = 12$
10 (2) (2)

⑧ $8 + 6 = 14$
10 (2) (4)

