



くりさがりのある
ひきざん 6

くりさがりのけいさん
(4や3をひく)

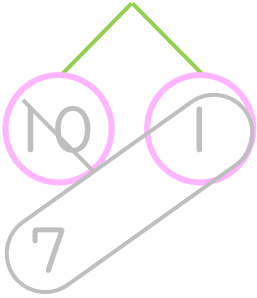


日にち： 月 日

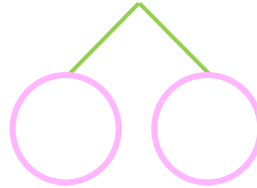
名まえ _____

・ けいさんをしましょう。(うすいじはなぞりましょう。)

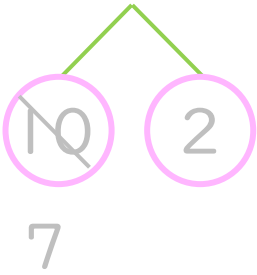
① $11 - 3 = \square$



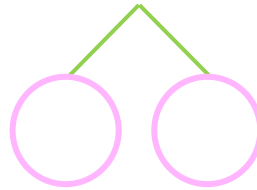
⑤ $11 - 4 = \square$



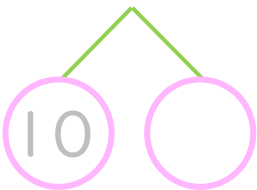
② $12 - 3 = \square$



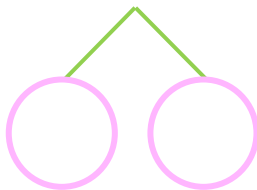
⑥ $12 - 4 = \square$



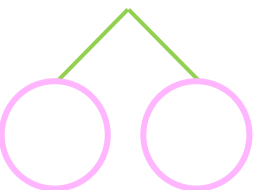
③ $11 - 3 = \square$



⑦ $13 - 4 = \square$



④ $12 - 3 = \square$



⑧ $11 - 4 = \square$





くりさがりのある
ひきざん 6

● くりさがりのけいさん
(4や3をひく)

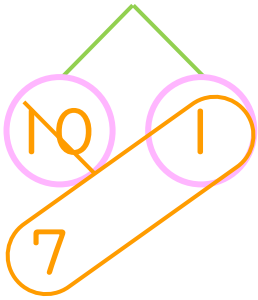


日にち： 月 日

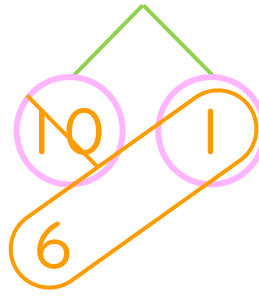
名まえ _____

・ けいさんをしましょう。(うすいじはなぞりましょう。)

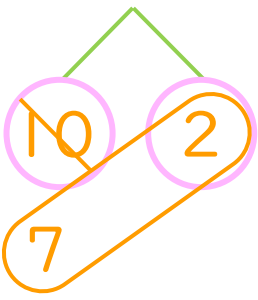
① $11 - 3 = 8$



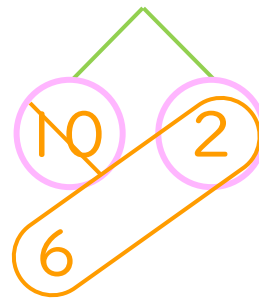
⑤ $11 - 4 = 7$



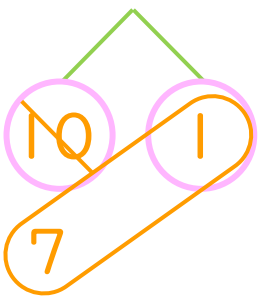
② $12 - 3 = 9$



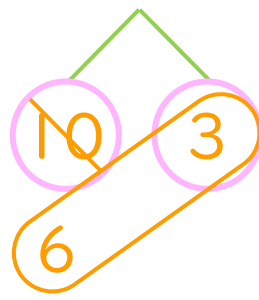
⑥ $12 - 4 = 8$



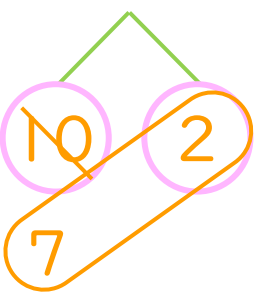
③ $11 - 3 = 8$



⑦ $13 - 4 = 9$



④ $12 - 3 = 9$



⑧ $11 - 4 = 7$

