



くりさがりのある  
ひきざん 4  
● くりさがりのけいさん  
(7をひく)

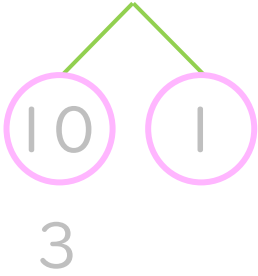


日にち：            月            日

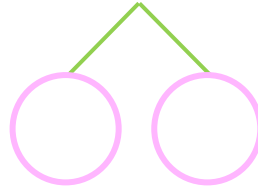
名まえ \_\_\_\_\_

・ けいさんをしましょう。(うすいじはなぞりましょう。)

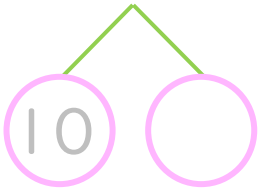
①  $11 - 7 = \square$



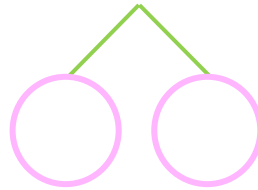
⑤  $12 - 7 = \square$



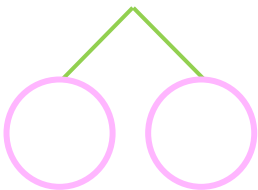
②  $13 - 7 = \square$



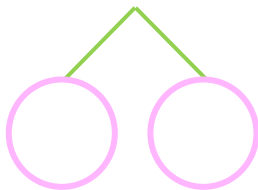
⑥  $11 - 7 = \square$



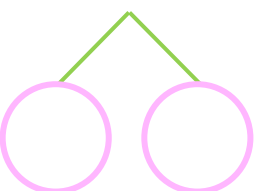
③  $14 - 7 = \square$



⑦  $13 - 7 = \square$



④  $15 - 7 = \square$



⑧  $16 - 7 = \square$





くりさがりのある  
ひきざん 4  
● くりさがりのけいさん  
(7をひく)

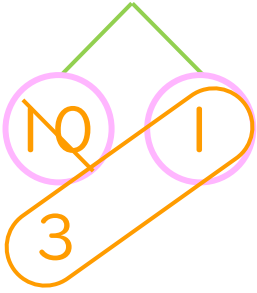


日にち： 月 日

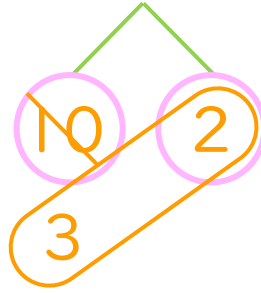
名まえ \_\_\_\_\_

・ けいさんをしましょう。(うすいじはなぞりましょう。)

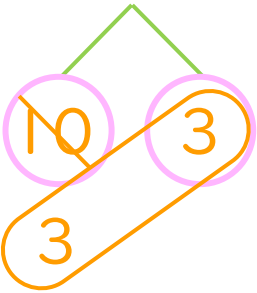
$$\textcircled{1} \quad 11 - 7 = \boxed{4}$$



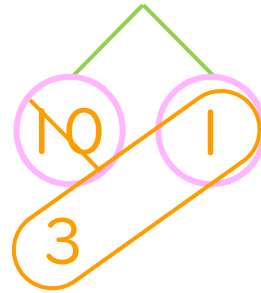
$$\textcircled{5} \quad 12 - 7 = \boxed{5}$$



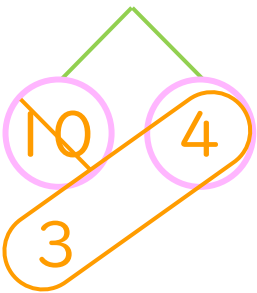
$$\textcircled{2} \quad 13 - 7 = \boxed{6}$$



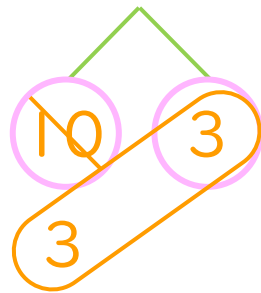
$$\textcircled{6} \quad 11 - 7 = \boxed{4}$$



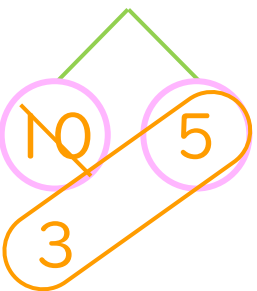
$$\textcircled{3} \quad 14 - 7 = \boxed{7}$$



$$\textcircled{7} \quad 13 - 7 = \boxed{6}$$



$$\textcircled{4} \quad 15 - 7 = \boxed{8}$$



$$\textcircled{8} \quad 16 - 7 = \boxed{9}$$

