



くりさがりのある  
ひきざん 3

● くりさがりの けいさん  
(8 をひく)

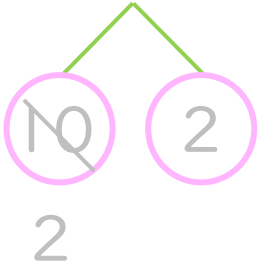


日にち：            月            日

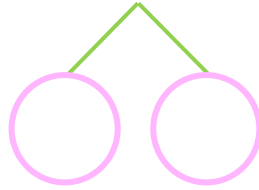
名まえ \_\_\_\_\_

・ けいさんを しましょう。(うすいじは なぞりましょう。)

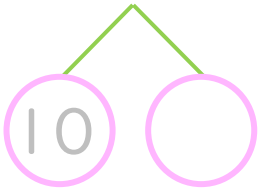
①  $12 - 8 = \square$



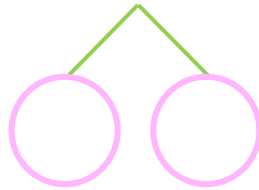
⑤  $13 - 8 = \square$



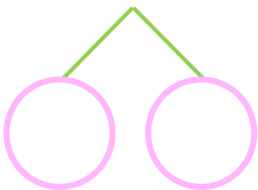
②  $11 - 8 = \square$



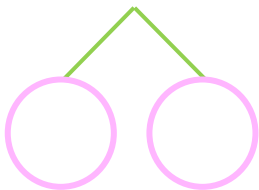
⑥  $15 - 8 = \square$



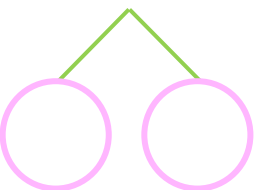
③  $14 - 8 = \square$



⑦  $16 - 8 = \square$



④  $17 - 8 = \square$



⑧  $11 - 8 = \square$





くりさがりのある  
ひきざん 3

● くりさがりのけいさん  
(8をひく)

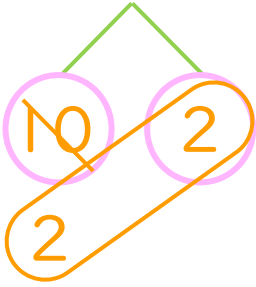


日にち：            月            日

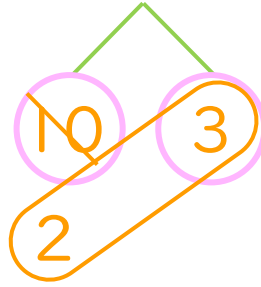
名まえ \_\_\_\_\_

・ けいさんをしましょう。(うすいじはなぞりましょう。)

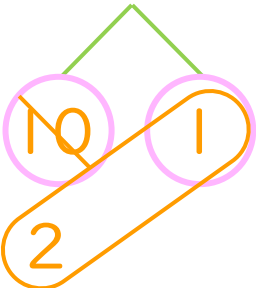
①  $12 - 8 = 4$



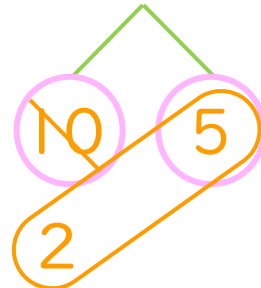
⑤  $13 - 8 = 5$



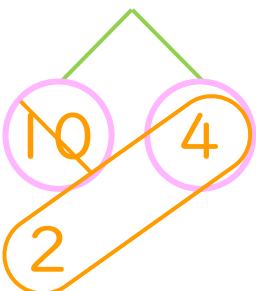
②  $11 - 8 = 3$



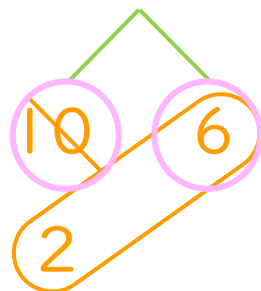
⑥  $15 - 8 = 7$



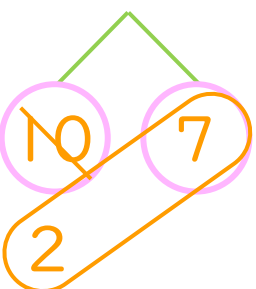
③  $14 - 8 = 6$



⑦  $16 - 8 = 8$



④  $17 - 8 = 9$



⑧  $11 - 8 = 3$

