



# あわせていくつ8

● 0のたしざん

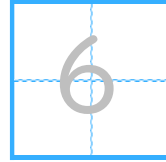


日にち：            月            日

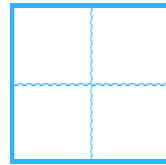
名まえ \_\_\_\_\_

・ たしざんをしましょう。(うすいじはなぞりましょう。)

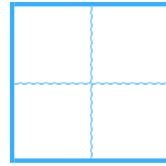
①  $0 + 6 =$



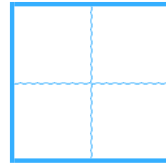
②  $2 + 0 =$



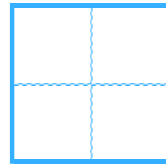
③  $0 + 3 =$



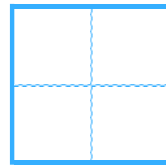
④  $0 + 0 =$



⑤  $0 + 4 =$



⑥  $1 + 0 =$





# あわせていくつ8

● 0のたしざん

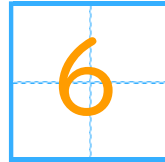


日にち：            月            日

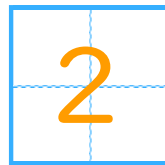
名まえ \_\_\_\_\_

・ たしざんをしましょう。(うすいじはなぞりましょう。)

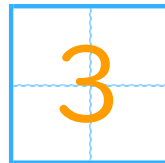
$① \quad 0 + 6 =$



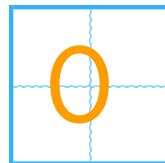
$② \quad 2 + 0 =$



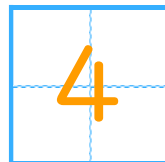
$③ \quad 0 + 3 =$



$④ \quad 0 + 0 =$



$⑤ \quad 0 + 4 =$



$⑥ \quad 1 + 0 =$

