




なかまづくりとかず5

あわせて5になるかず



日にち： 月 日


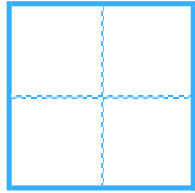
名まえ _____

・ いくつでしょう。  にすうじをかきましょう。

①

5


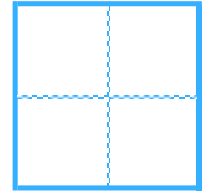
4



③


5

2




②

5

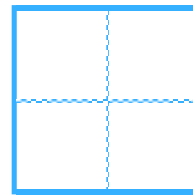


3




④

5



1






なかまづくりとかず5

あわせて5になるかず



日にち： 月 日

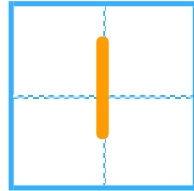
名まえ _____

・ いくつでしょう。  にすうじをかきましょう。

①

5


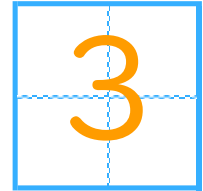
4



③

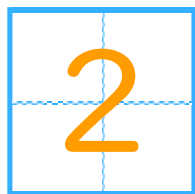
5

2



②

5

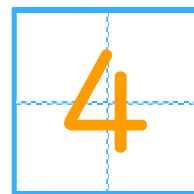


3



④

5



1

