



くりさがりのある
ひきざん 2

● くりさがりのけいさん
(9をひく)

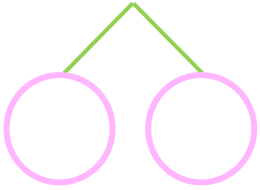


日にち： 月 日

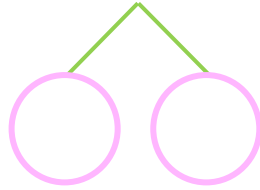
名まえ _____

・ けいさんをしましょう。

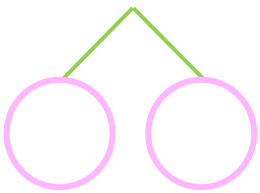
① $14 - 9 = \square$



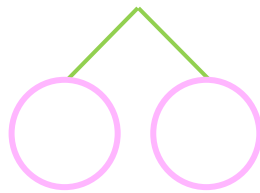
⑤ $12 - 9 = \square$



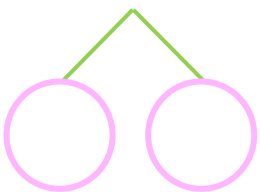
② $13 - 9 = \square$



⑥ $16 - 9 = \square$



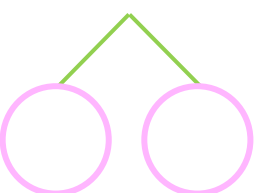
③ $15 - 9 = \square$



⑦ $17 - 9 = \square$



④ $11 - 9 = \square$



⑧ $12 - 9 = \square$





くりさがりのある
ひきざん 2

● くりさがりのけいさん
(9をひく)

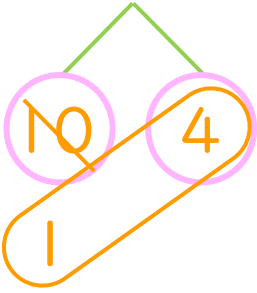


日にち： 月 日

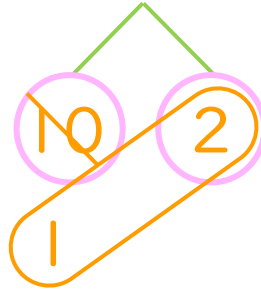
名まえ _____

・ けいさんをしましょう。

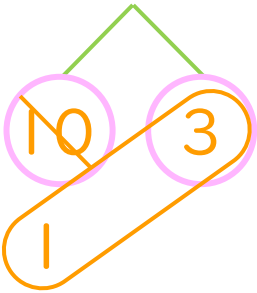
① $14 - 9 = 5$



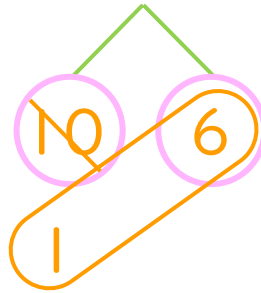
⑤ $12 - 9 = 3$



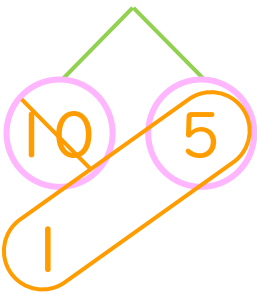
② $13 - 9 = 4$



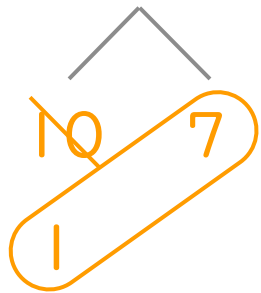
⑥ $16 - 9 = 7$



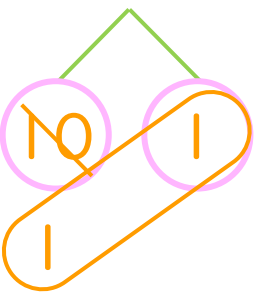
③ $15 - 9 = 6$



⑦ $17 - 9 = 8$



④ $11 - 9 = 2$



⑧ $12 - 9 = 3$

