



くりさがりのある
ひきざん 6

● くりさがりのけいさん
(4や3をひく)

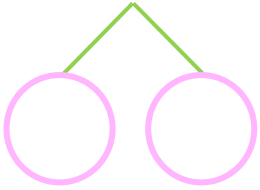


日にち： 月 日

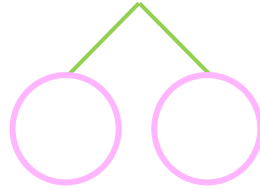
名まえ _____

・ けいさんをしましょう。

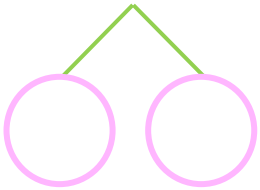
① 1 2 - 3 =



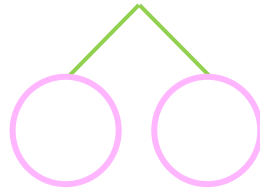
⑤ 1 3 - 4 =



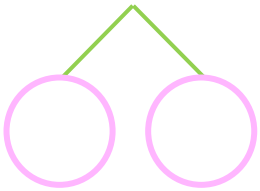
② 1 1 - 3 =



⑥ 1 1 - 4 =



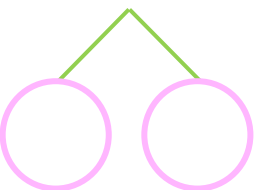
③ 1 2 - 3 =



⑦ 1 2 - 4 =



④ 1 1 - 3 =



⑧ 1 3 - 4 =





くりさがりのある
ひきざん 6

● くりさがりのけいさん
(4や3をひく)

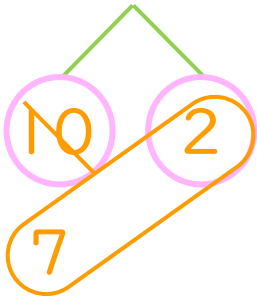


日にち： 月 日

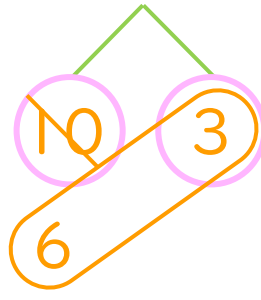
名まえ _____

・ けいさんをしましょう。

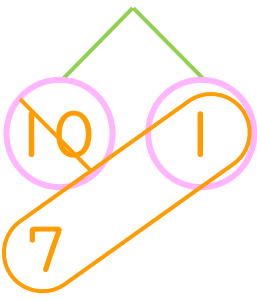
① $12 - 3 = 9$



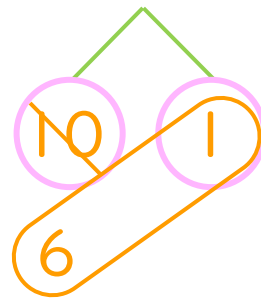
⑤ $13 - 4 = 9$



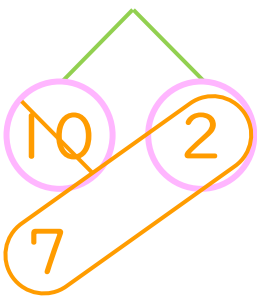
② $11 - 3 = 8$



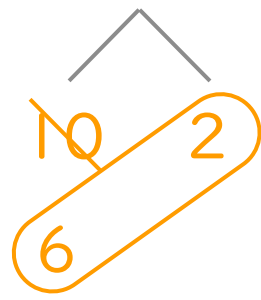
⑥ $11 - 4 = 7$



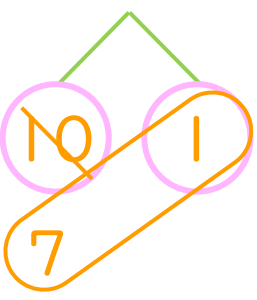
③ $12 - 3 = 9$



⑦ $12 - 4 = 8$



④ $11 - 3 = 8$



⑧ $13 - 4 = 9$

