



くりさがりのある
ひきざん 5

● くりさがりのけいさん
(6や5をひく)

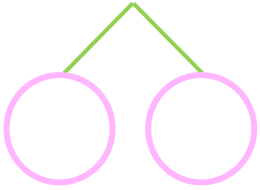


日にち： 月 日

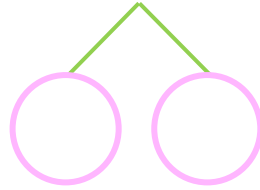
名まえ _____

・ けいさんをしましょう。

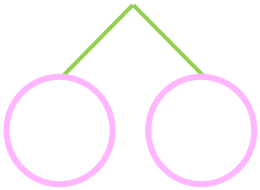
① 1 1 - 5 =



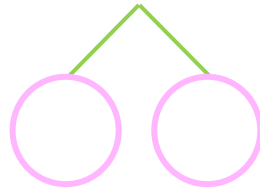
⑤ 1 5 - 6 =



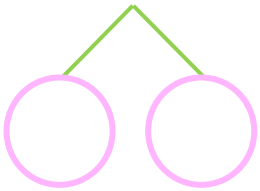
② 1 4 - 5 =



⑥ 1 4 - 6 =



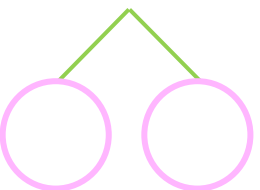
③ 1 2 - 5 =



⑦ 1 2 - 6 =



④ 1 3 - 5 =



⑧ 1 1 - 6 =





くりさがりのある
ひきざん 5

● くりさがりのけいさん
(6や5をひく)

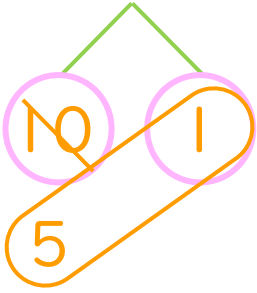


日にち： 月 日

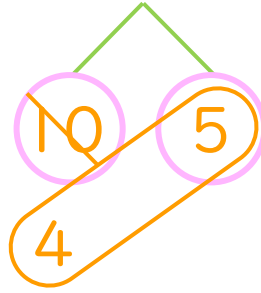
名まえ _____

・ けいさんをしましょう。

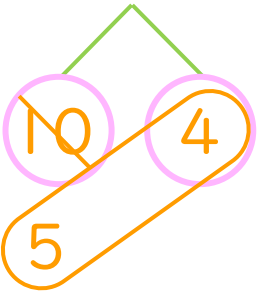
① $11 - 5 = 6$



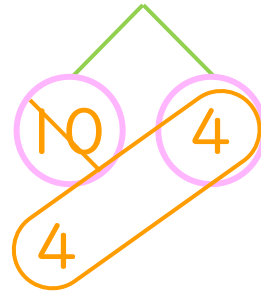
⑤ $15 - 6 = 9$



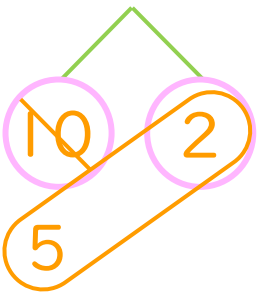
② $14 - 5 = 9$



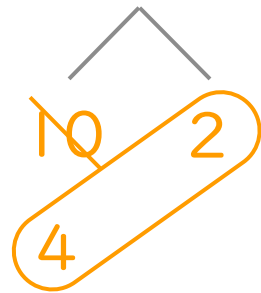
⑥ $14 - 6 = 8$



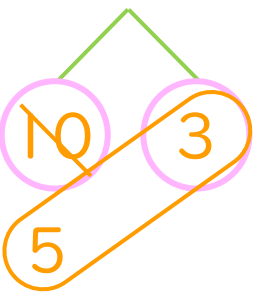
③ $12 - 5 = 7$



⑦ $12 - 6 = 6$



④ $13 - 5 = 8$



⑧ $11 - 6 = 5$

