



くりさがりのある  
ひきざん 2

● くりさがりのけいさん  
(9をひく)

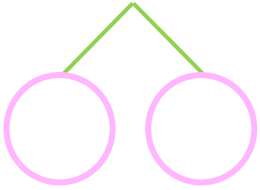


日にち：        月        日

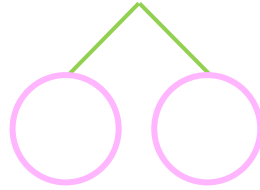
名まえ \_\_\_\_\_

・ けいさんをしましょう。

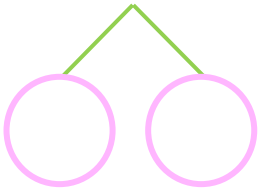
①  $16 - 9 = \square$



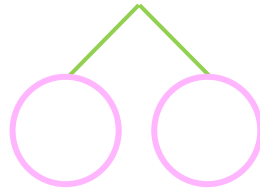
⑤  $13 - 9 = \square$



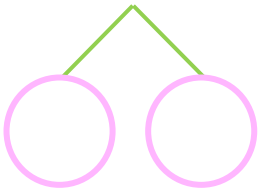
②  $11 - 9 = \square$



⑥  $12 - 9 = \square$



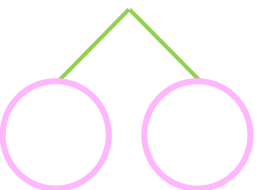
③  $13 - 9 = \square$



⑦  $18 - 9 = \square$



④  $15 - 9 = \square$



⑧  $14 - 9 = \square$





くりさがりのある  
ひきざん 2

● くりさがりのけいさん  
(9をひく)

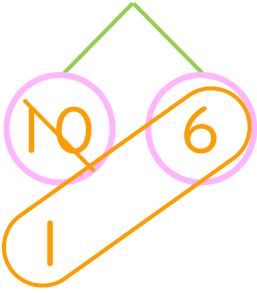


日にち：            月            日

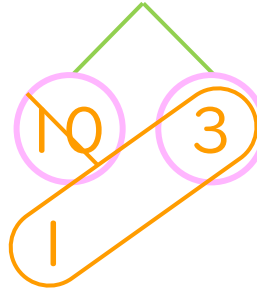
名まえ \_\_\_\_\_

・ けいさんをしましょう。

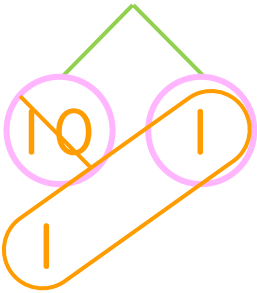
①  $16 - 9 = 7$



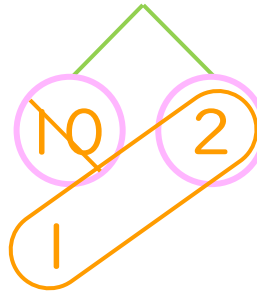
⑤  $13 - 9 = 4$



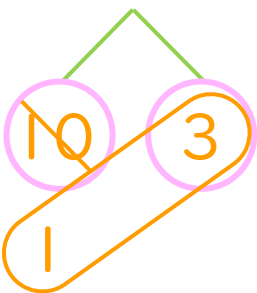
②  $11 - 9 = 2$



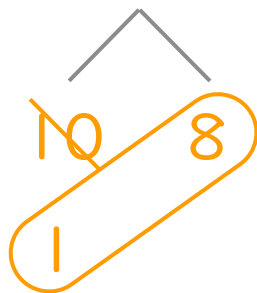
⑥  $12 - 9 = 3$



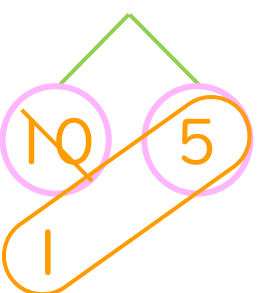
③  $13 - 9 = 4$



⑦  $18 - 9 = 9$



④  $15 - 9 = 6$



⑧  $14 - 9 = 5$

