



あわせていくつ8

0のたしざん

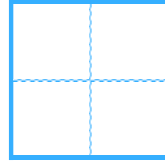


日にち： 月 日

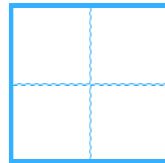
名まえ _____

・ たしざんをしましょう。

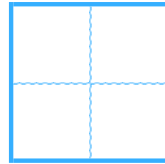
① $0 + 0 =$



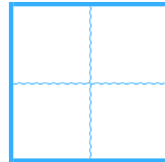
② $1 + 0 =$



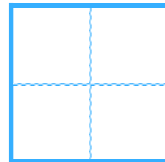
③ $0 + 4 =$



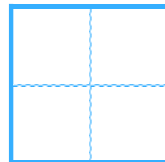
④ $3 + 0 =$



⑤ $0 + 2 =$



⑥ $5 + 0 =$





あわせていくつ8

0のたしざん

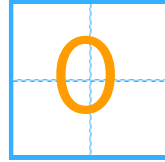


日にち： 月 日

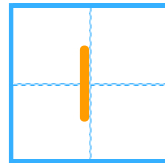
名まえ _____

・ たしざんをしましょう。

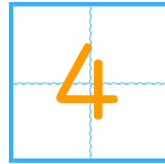
$① \quad 0 + 0 =$



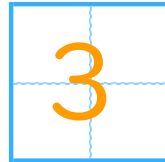
$② \quad 1 + 0 =$



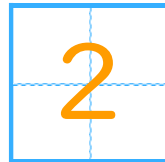
$③ \quad 0 + 4 =$



$④ \quad 3 + 0 =$



$⑤ \quad 0 + 2 =$



$⑥ \quad 5 + 0 =$

