



のこりはいくつ？

◎ 10 から ひく ひきざん

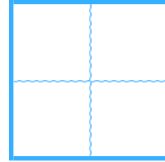


日にち： 月 日

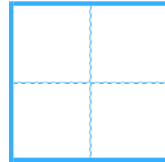
名まえ _____

・ ひきざんを しましょう。

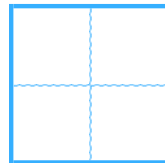
① $10 - 9 =$



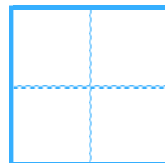
② $10 - 4 =$



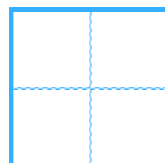
③ $10 - 2 =$



④ $10 - 6 =$



⑤ $10 - 3 =$





のこりはいくつ？

◎ 10 から ひく ひきざん

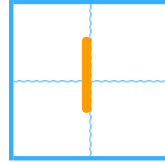


日にち： 月 日

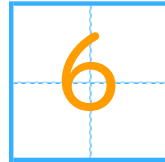
名まえ _____

・ ひきざんを しましょう。

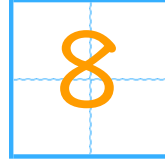
① $10 - 9 =$



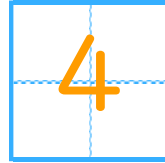
② $10 - 4 =$



③ $10 - 2 =$



④ $10 - 6 =$



⑤ $10 - 3 =$

