



くりさがりのある  
ひきざん 5

● くりさがりのけいさん  
(6や5をひく)

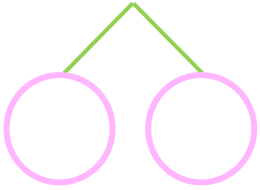


日にち：            月            日

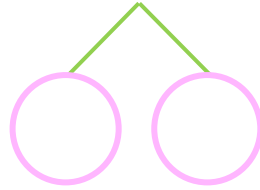
名まえ \_\_\_\_\_

・ けいさんをしましょう。

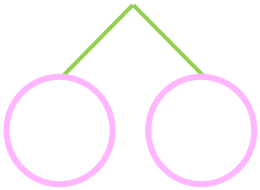
①  $14 - 6 = \square$



⑤  $12 - 5 = \square$



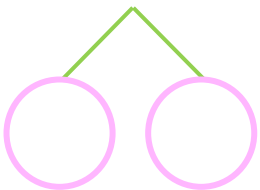
②  $11 - 5 = \square$



⑥  $12 - 6 = \square$



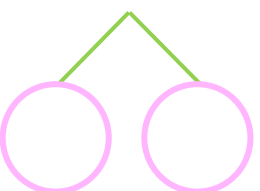
③  $13 - 5 = \square$



⑦  $15 - 6 = \square$



④  $11 - 6 = \square$



⑧  $14 - 5 = \square$





くりさがりのある  
ひきざん 5

● くりさがりのけいさん  
(6や5をひく)

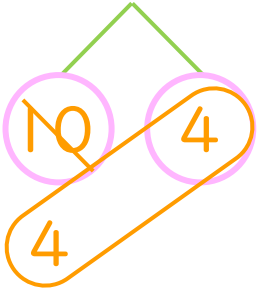


日にち：            月            日

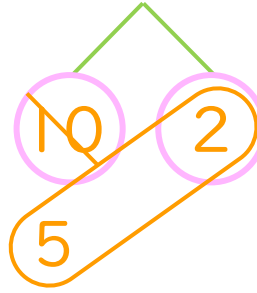
名まえ \_\_\_\_\_

・ けいさんをしましょう。

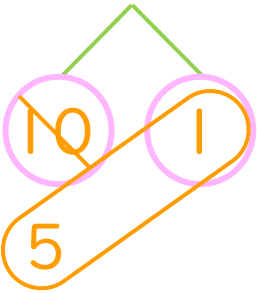
①  $14 - 6 = 8$



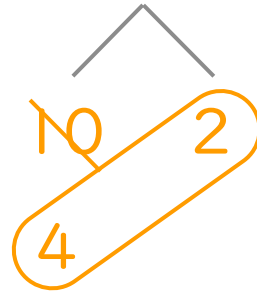
⑤  $12 - 5 = 7$



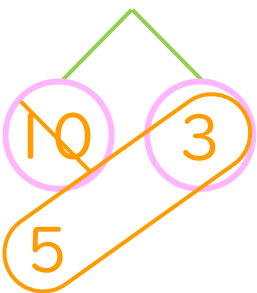
②  $11 - 5 = 6$



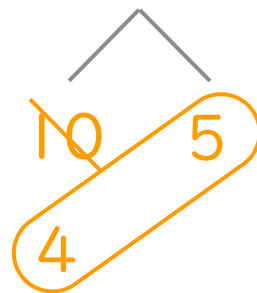
⑥  $12 - 6 = 6$



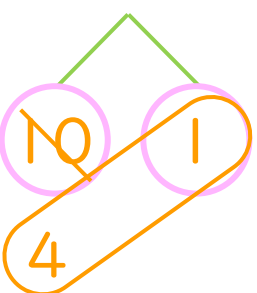
③  $13 - 5 = 8$



⑦  $15 - 6 = 9$



④  $11 - 6 = 5$



⑧  $14 - 5 = 9$

