



くりさがりのある
ひきざん 4
● くりさがりのけいさん
(7をひく)

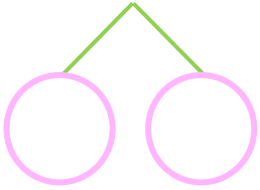


日にち： 月 日

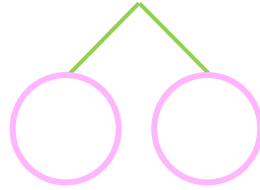
名まえ _____

・ けいさんをしましょう。

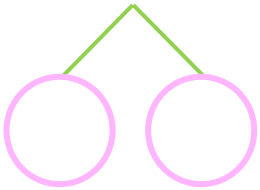
① $12 - 7 = \square$



⑤ $13 - 7 = \square$



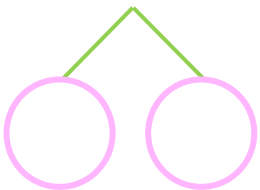
② $15 - 7 = \square$



⑥ $11 - 7 = \square$



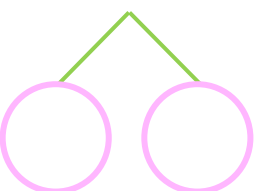
③ $14 - 7 = \square$



⑦ $12 - 7 = \square$



④ $16 - 7 = \square$



⑧ $15 - 7 = \square$





くりさがりのある
ひきざん 4

● くりさがりのけいさん
(7をひく)

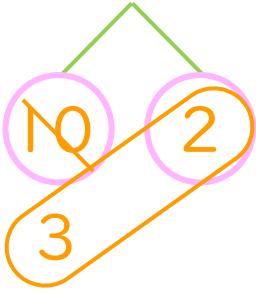


日にち： 月 日

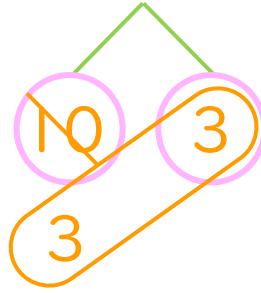
名まえ _____

・ けいさんをしましょう。

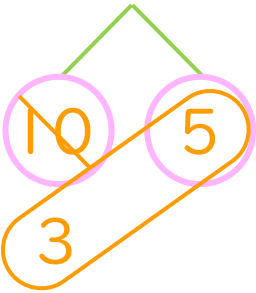
① $12 - 7 = 5$



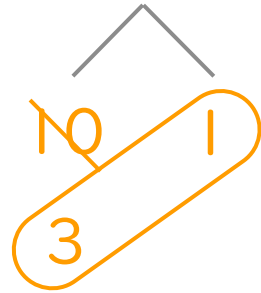
⑤ $13 - 7 = 6$



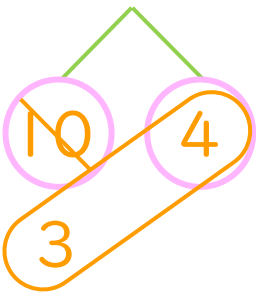
② $15 - 7 = 8$



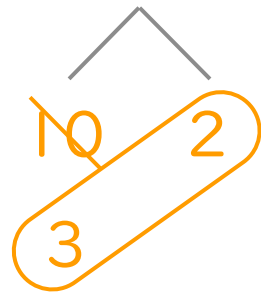
⑥ $11 - 7 = 4$



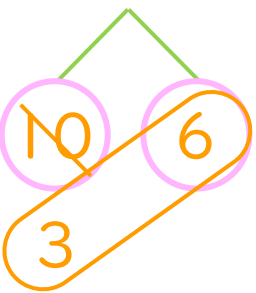
③ $14 - 7 = 7$



⑦ $12 - 7 = 5$



④ $16 - 7 = 9$



⑧ $15 - 7 = 8$

