



くりさがりのある  
ひきざん 3  
● くりさがりのけいさん  
(8をひく)

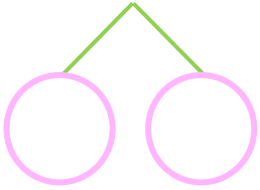


日にち：            月            日

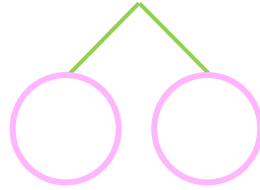
名まえ \_\_\_\_\_

・ けいさんをしましょう。

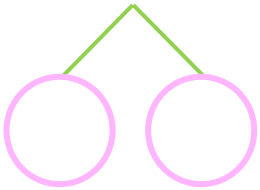
①  $12 - 8 = \square$



⑤  $16 - 8 = \square$



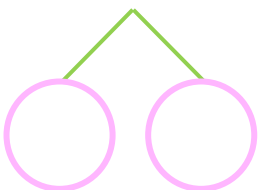
②  $16 - 8 = \square$



⑥  $13 - 8 = \square$



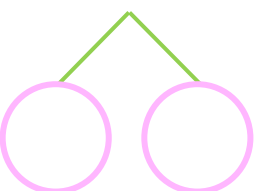
③  $11 - 8 = \square$



⑦  $17 - 8 = \square$



④  $15 - 8 = \square$



⑧  $14 - 8 = \square$





くりさがりのある  
ひきざん 3

● くりさがりのけいさん  
(8をひく)

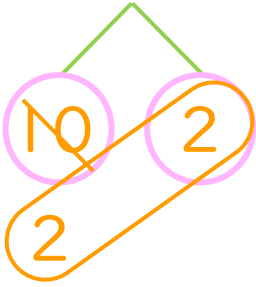


日にち：            月            日

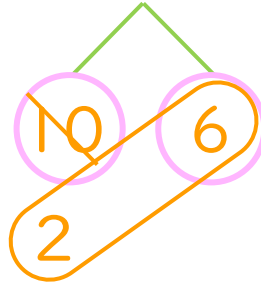
名まえ \_\_\_\_\_

・ けいさんをしましょう。

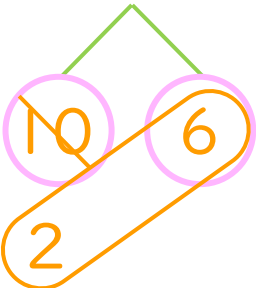
①  $12 - 8 = 4$



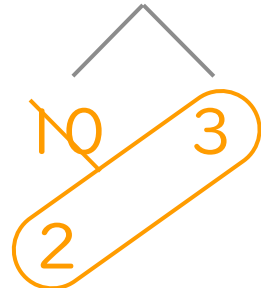
⑤  $16 - 8 = 8$



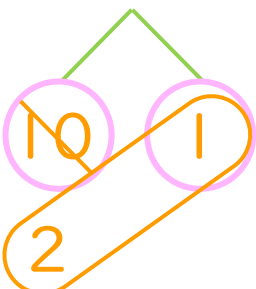
②  $16 - 8 = 8$



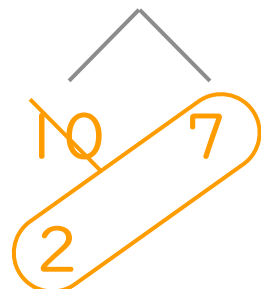
⑥  $13 - 8 = 5$



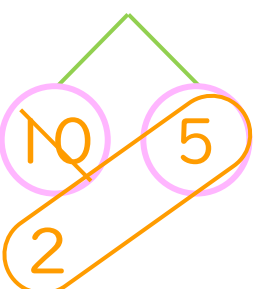
③  $11 - 8 = 3$



⑦  $17 - 8 = 9$



④  $15 - 8 = 7$



⑧  $14 - 8 = 6$

