



のこりはいくつ 10



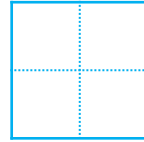
● 0のひきざん

日にち：            月            日

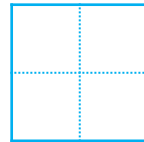
名まえ \_\_\_\_\_

・ ひきざんをしましょう。

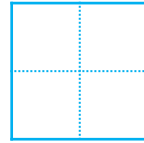
①  $1 - 0 =$



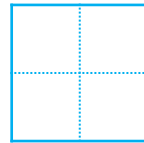
②  $6 - 6 =$



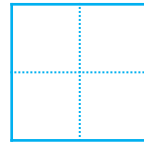
③  $2 - 0 =$



④  $3 - 3 =$



⑤  $5 - 0 =$





のこりはいくつ 10



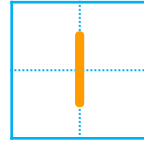
● 0のひきざん

日にち：            月            日

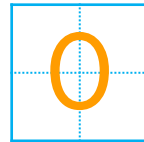
名まえ \_\_\_\_\_

・ ひきざんをしましょう。

①  $1 - 0 =$



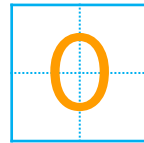
②  $6 - 6 =$



③  $2 - 0 =$



④  $3 - 3 =$



⑤  $5 - 0 =$

